



Coimisiún na Scrúduithe Stáit
State Examinations Commission

**JUNIOR CERTIFICATE
EXAMINATION**

2010

MARKING SCHEMES

MATHEMATICS

HIGHER LEVEL



Coimisiún na Scrúduithe Stáit
State Examinations Commission

**JUNIOR CERTIFICATE
EXAMINATION**

2010

MARKING SCHEME

**MATHEMATICS
HIGHER LEVEL
PAPER 1**

MARKING SCHEME
JUNIOR CERTIFICATE EXAMINATION 2010
MATHEMATICS - HIGHER LEVEL - PAPER 1

GENERAL GUIDELINES FOR EXAMINERS

1. Penalties of three types are applied to candidates' work as follows:
 - Blunders - mathematical errors/omissions (-3)
 - Slips- numerical errors (-1)
 - Misreadings (provided task is not oversimplified) (-1).Frequently occurring errors to which these penalties must be applied are listed in the scheme. They are labelled: B1, B2, B3,..., S1, S2,..., M1, M2,...etc. These lists are not exhaustive.
2. When awarding attempt marks, e.g. Att(3), note that
 - any *correct, relevant* step in a part of a question merits at least the attempt mark for that part
 - if deductions result in a mark which is lower than the attempt mark, then the attempt mark must be awarded
 - a mark between zero and the attempt mark is never awarded.
3. Worthless work is awarded zero marks. Some examples of such work are listed in the scheme and they are labelled as W1, W2,...etc.
4. The phrase "hit or miss" means that partial marks are not awarded – the candidate receives all of the relevant marks or none.
5. The phrase "and stops" means that no more work is shown by the candidate.
6. Special notes relating to the marking of a particular part of a question are indicated by an asterisk. These notes immediately follow the box containing the relevant solution.
7. The sample solutions for each question are not intended to be exhaustive lists – there may be other correct solutions.
8. Unless otherwise indicated in the scheme, accept the best of two or more attempts – even when attempts have been cancelled.
9. The *same* error in the *same* section of a question is penalised *once* only.
10. Particular cases, verifications and answers derived from diagrams (unless requested) qualify for attempt marks at most.
11. A serious blunder, omission or misreading results in the attempt mark at most.
12. Do not penalise the use of a comma for a decimal point, e.g. €5.50 may be written as €5,50.

QUESTION 1

| | | |
|-----------------|---------------------------|---------------------|
| Part (a) | 10 marks | Att 3 |
| Part (b) | 25(10, 10, 5)marks | Att(3, 3, 2) |
| Part (c) | 15(10, 5) marks | Att(3, 2) |

Part (a) **10 marks** **Att 3**

The price of a litre of petrol on the 1st of August was €1·20.
The price on the 1st September was €1·17.

✍ Calculate the percentage decrease over this period.

(a) **10 marks** **Att 3**

$$\begin{array}{ll} \text{I} & \text{II} \\ \text{€1·20} - \text{€1·17} = \text{€0·03} & \text{or} \quad \text{3 cents} \end{array}$$

$$\frac{\cdot 03}{1 \cdot 20} \times \frac{100}{1} \qquad \frac{3}{120} \times \frac{100}{1}$$

$$\text{Percentage decrease} = 2 \cdot 5\%$$

Blunders (-3)

- B1 Correct answer no work shown. ✍
- B2 Decimal error
- B3 Percentage of incorrect figure
- B4 Inversion
- B5 Mathematical error
- B6 Sign error

Slips (-1)

- S1 Numerical error, max -3

Misreadings (-1)

- M1 Incorrect number written down, provided it doesn't oversimplify the question

Attempts (3 marks)

- A1 Subtracts and stops
- A2 Some mention of 100, 3 or ·03

Worthless (0)

- W1 Adds €1·20 and €1·17 and stops
- W2 Incorrect answer no work shown, except for numbers mentioned in A2.

- (i) ✍ By rounding correct to the nearest whole number, estimate the value of

$$\frac{3.8}{4.23} + (2.97)^3 \div \sqrt{9 \cdot 16}$$

Then, evaluate $\frac{3.8}{4.23} + (2.97)^3 \div \sqrt{9 \cdot 16}$

correct to one decimal place.

- (ii) ✍ By putting the largest number first, place the following numbers in order:

$$\frac{7}{6}, \quad \frac{\sqrt{6}}{2}, \quad (1.11)^2, \quad \sqrt{1 \cdot 3456}$$

(b) (i) Estimate

10 marks

Att 3

$$\frac{4}{4} + 3^3 \div \sqrt{9} =$$

$$1 + 27 \div 3 =$$

$$1 + 9 =$$

$$\text{Estimate: } 10$$

Blunders (-3)

- B1 Correct answer no work shown. ✍
 B2 Incorrect order *i.e.* precedent error
 B3 Incorrect square root
 B4 Incorrect use of indices
 B5 Decimal error
 B6 Mathematical errors
 B7 Calculates first, then rounds (*e.g.* 9.6 with work, rounded to 10)

Slips (-1)

- S1 Numerical errors
 S2 Incorrect rounding, to a max of 3, if it affects answer

Misreadings (-1)

- M1 Misreads a digit, provided it doesn't oversimplify the question

Attempts (3 marks)

- A1 Some correct rounding
 A2 Any correct step without rounding

Worthless (0)

- W1 Incorrect answer no work shown
 W2 9.6 without work

(b) (i) Evaluate

10 marks

Att 3

Evaluate

$$\frac{3.8}{4.23} + (2.97)^3 \div \sqrt{9 \cdot 16}$$

$$\cdot 898345153 + 26 \cdot 198073 \div 3 \cdot 02654919$$

$$\cdot 898345153 + 8 \cdot 656086967$$

$$9 \cdot 554432121$$

$$= 9 \cdot 6$$

Blunders (-3)

B1 Correct answer no work shown. ✍

B2 Incorrect order i.e. precedent error (e.g. $8 \cdot 952908561 = 9 \cdot 0$ to one decimal place)

B3 Incorrect square root

B4 Incorrect use of indices

B5 Decimal error

B6 Mathematical errors

Slips (-1)

S1 Numerical errors

S2 Incorrect or no rounding, apply once if it affects answer

Misreadings (-1)

M1 Misreads a digit, provided it doesn't oversimplify the question

Attempts (3 marks)

A1 Any relevant correct step i.e. division, cubing, square root etc.

Worthless (0)

W1 Incorrect answer no work shown

(b) (ii)

5 marks

Att 2

1.2321, 1.224744871, 1.166666, 1.16 *or*

1.23, 1.22, 1.17, 1.16

$(1.11)^2$, $\frac{\sqrt{6}}{2}$, $\frac{7}{6}$, $\sqrt{1.3456}$

- * Accept correct decimals in order for full marks, at least 2 correct decimal places required. (Ignore rounding if it doesn't affect answer).
- * Accept candidate's values when arranging

Blunders (-3)

- B1 Correct answer no work shown. ✗
- B2 Incorrect order with relevant work shown, but note W1 and W2
- B3 Mathematical or decimal error
- B4 Square root error
- B5 Indices error

Slips (-1)

- S1 Reverses order
- S2 Incorrect or early rounding which affects answer, max -3

Misreadings (-1)

- M1 Incorrect reading of a digit provided it doesn't oversimplify the question

Attempts (2 marks)

- A1 Finds decimal value of any given number and stops



Worthless (0)

- W1 Incorrect answer no work or no work of merit
- W2 Original list presented with no work of merit
- W3 $\sqrt{9} = 4.5$, with otherwise no work of merit

Part (c)

15(10, 5) marks

Att(3, 2)

- (i) The standard rate of income tax is 20% and the higher rate is 41%.
The standard rate cut-off point is €36 500.
Aisling has a gross income of €47 500 and total tax credits of €1830.
 Calculate Aisling's net income.
- (ii) The following year Aisling's gross income increases.
The tax rates, cut-off point and tax credits remain unchanged.
Her net tax now amounts to €15 105.
 What is her new gross income?

(c) (i)


10 marks

Att 3

$$\begin{aligned} €47\,500 - €36\,500 &= €11\,000 \\ €36\,500 \times 20\% &= €\,7300 \\ €11\,000 \times 41\% &= €4510 \\ €7300 + €4510 &= €11\,810 \\ €11\,810 - €1830 &= €9980 \\ €47\,500 - €9980 & \\ \text{Net income} &= €37\,520 \end{aligned}$$

* If candidate gets 41% of €36 500 and 20% of €11 000 and continues, this is one blunder only (€32 165)

Blunders (-3)

- B1 Correct answer no work shown. 
- B2 Decimal error
- B3 20% of an incorrect figure, but note *
- B4 41% of an incorrect figure, but note *
- B5 Mishandling of tax credits leading to the wrong answer
- B6 Fails to get total tax
- B7 Fails to complete final step
- B8 Mathematical blunder

Slips (-1)

- S1 Numerical error to a max of 3

Misreadings (-1)

- M1 Incorrect reading of a digit which does not oversimplify the question
- M2 Uses 21%
- M3 Uses 40% or 42%

Attempts (3 marks)

- A1 Finds 20% or 41% of a number and stops, but note W1
- A2 Writes 20% as $\frac{1}{5}$ or $\frac{20}{100}$ or $\cdot 2$, without further work of merit
- A3 Writes 41% as $\frac{41}{100}$ or $\cdot 41$ without further work of merit
- A4 Some knowledge of tax credits eg. *Tax payable = total tax – tax credits*
- A5 Some knowledge of net income eg. *Net income = gross income – net tax*
- A6 Any relevant step
- A7 Any **one** of the following numbers without work €7,300 or €4,510 or €11,810 or €9,980

Worthless (0)

- W1 Incorrect answer no work shown

(c) (ii)

5 marks

Att 2

I

$$\begin{aligned} \text{€}15\,105 + \text{€}1830 &= \text{€}16\,935 \\ \text{€}16\,935 - \text{€}7300 &= \text{€}9635 \\ \text{€}9635 &= 41\% \\ \text{€}9635 \div 41 &= \text{€}235 \\ \text{€}235 &= 1\% \\ \text{€}235 \times 100 &= \text{€}23\,500 \\ \text{€}23\,500 + \text{€}36\,500 &= \\ \text{New gross income} &= \text{€}60\,000 \end{aligned}$$

II

$$\begin{aligned} \text{€}15\,105 - \text{€}9980 &= \text{€}5125 && \text{Net tax – previous net tax} \\ \text{€}5125 &= 41\% \text{ of increase} \\ \frac{\text{€}5,125}{41} &= \text{€}125 = 1\% \\ \text{€}125 \times 100 &= \text{€}12\,500 \\ \text{€}12\,500 + \text{€}47\,500 &= \text{€}60\,000 && \text{Increase + previous} \end{aligned}$$

III

$$\begin{aligned} x &= \text{Gross income} \\ (\text{€}7300 + (x - \text{€}36\,500)(\cdot 41)) - \text{€}1830 &= \text{Tax paid} \\ \text{€}7300 + \cdot 41x - \text{€}14\,965 - \text{€}1830 &= \text{€}15\,105 \\ \cdot 41x - \text{€}9495 &= \text{€}15\,105 \\ \cdot 41x &= \text{€}15\,105 + \text{€}9495 \\ \cdot 41x &= \text{€}24\,600 \\ x &= \text{€}24\,600 \div \cdot 41 = \text{€}60\,000 \end{aligned}$$

* Accept candidate's values from **(c) (i)** in **II** and **III**

Blunders (-3)

- B1 Correct answer no work shown. ✍
- B2 Uses 20% instead of 41%
- B3 Incorrect use of tax credits
- B4 Adds €7300 instead of subtracting in method **I**
- B5 Divides by 100, and multiplies by 41
- B6 Stops at €23 500 **I** or €12 500 **II** or $€24\,600 \div \cdot 41$ **III**
- B7 Mathematical blunder

Slips (-1)

- S1 Stops at €23 500 + €36 500 **I** or €12 500 + €47 500 **II**
- S2 Numerical error, max -3

Misreadings (-1)

- M1 Incorrect reading of a digit which does not oversimplify the question

Attempts (2 marks)

- A1 Subtracts €7300 (as in Method **I**)
- A2 Adds €1830 (as in Method **I**)
- A3 Divides by 41
- A4 Multiplies by 100
- A5 Adds €36 500 to some relevant number
- A6 Any relevant step

Worthless (0)


- W1 Incorrect answer no work shown

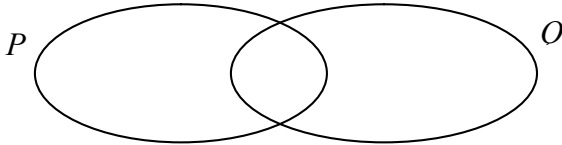
QUESTION 2

| | | |
|-----------------|---------------------------|---------------------|
| Part (a) | 10 marks | Att 3 |
| Part (b) | 20(5, 10, 5) marks | Att(2, 3, 2) |
| Part (c) | 20(10, 10) marks | Att(3, 3) |

Part (a) **10 marks** **Att 3**

P is the set of divisors of 12. Q is the set of divisors of 9.

 Using this information copy and complete the Venn diagram.

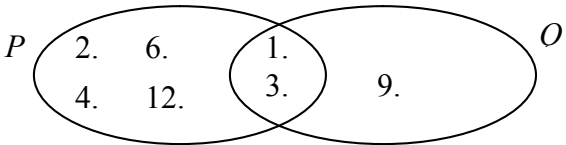


(a) **10 marks** **Att 3**

Divisors of 12 = {1,2,3,4,6,12}

Divisors of 9 = {1,3,9}

Venn diagram



* Ignore notation

Slips (-1)

S1 Each missing or incorrect or misplaced entry from the Venn Diagram

Attempts (3 marks)

A1 Any correct divisors of 12 or 9

Worthless (0)

W1 Copies diagram and stops

Part (b)

20 (5, 10, 5) marks

Att (2, 3, 2)

A group of 100 students were asked if they had a presence on particular social networking websites A , B and C .

24 students had a presence on A only, 40 had a presence on B and 50 had a presence on C .

14 students had a presence on A and B but not on C .

18 students had a presence on A and C but not on B .

8 students had a presence on B and C but not on A .

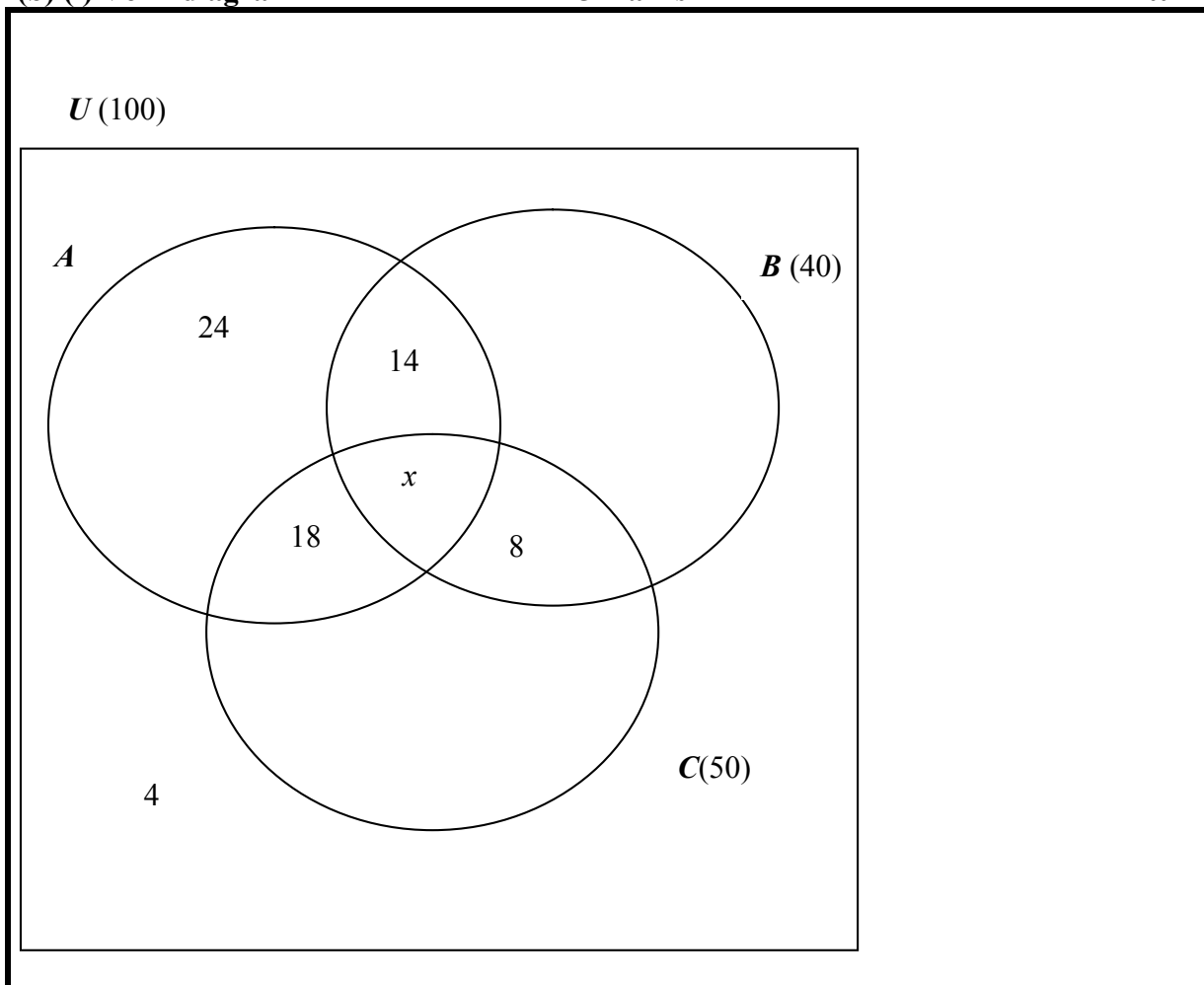
4 students stated that they did not have a presence on any of the websites

- (i) ✍ Using x to represent the number of students who had a presence on all three websites, construct a Venn diagram and solve for x .
- (ii) ✍ Hence, calculate the ratio of students with a presence on B only to the students with a presence on C only.

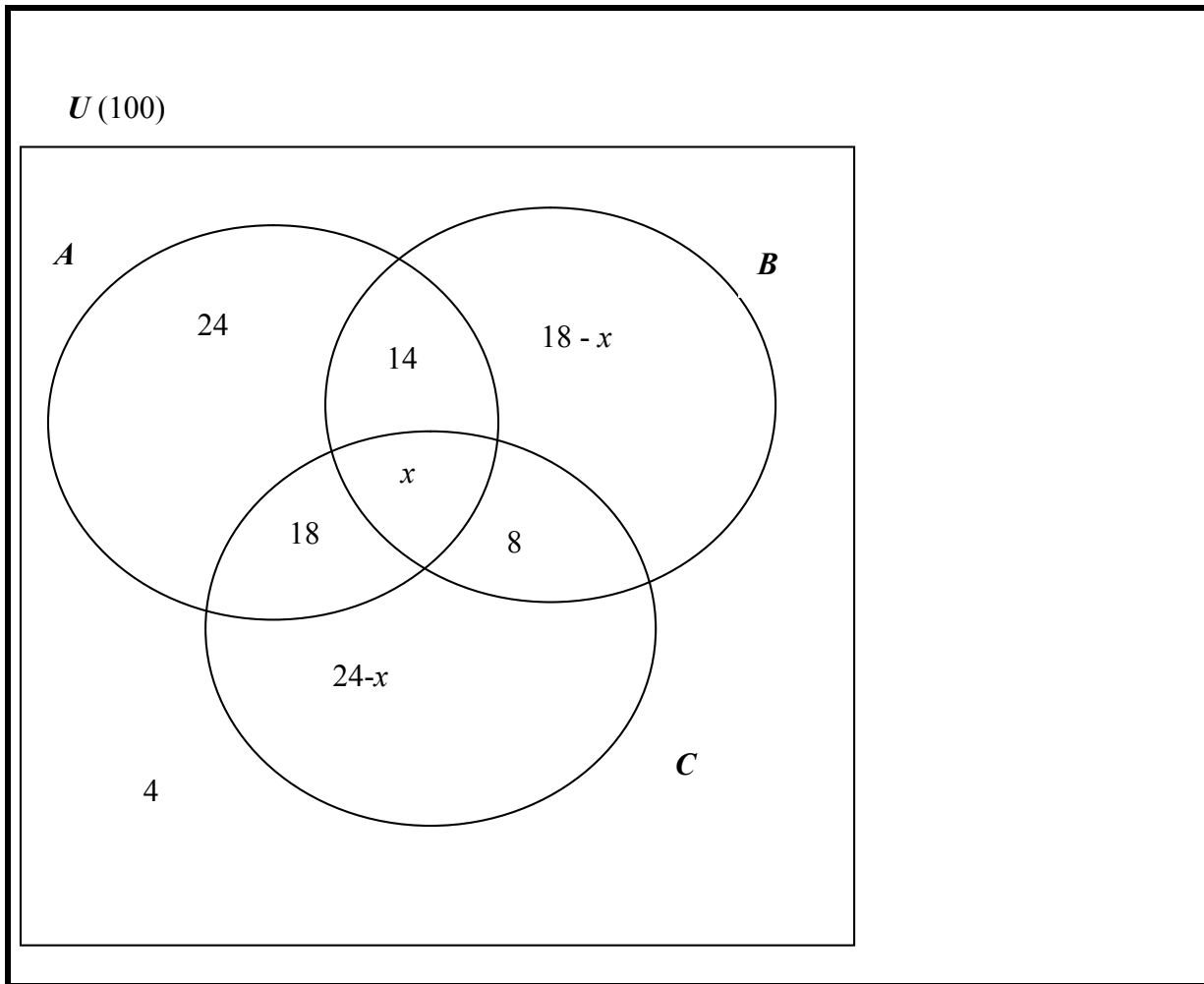
(b) (i) Venn diagram

5 marks

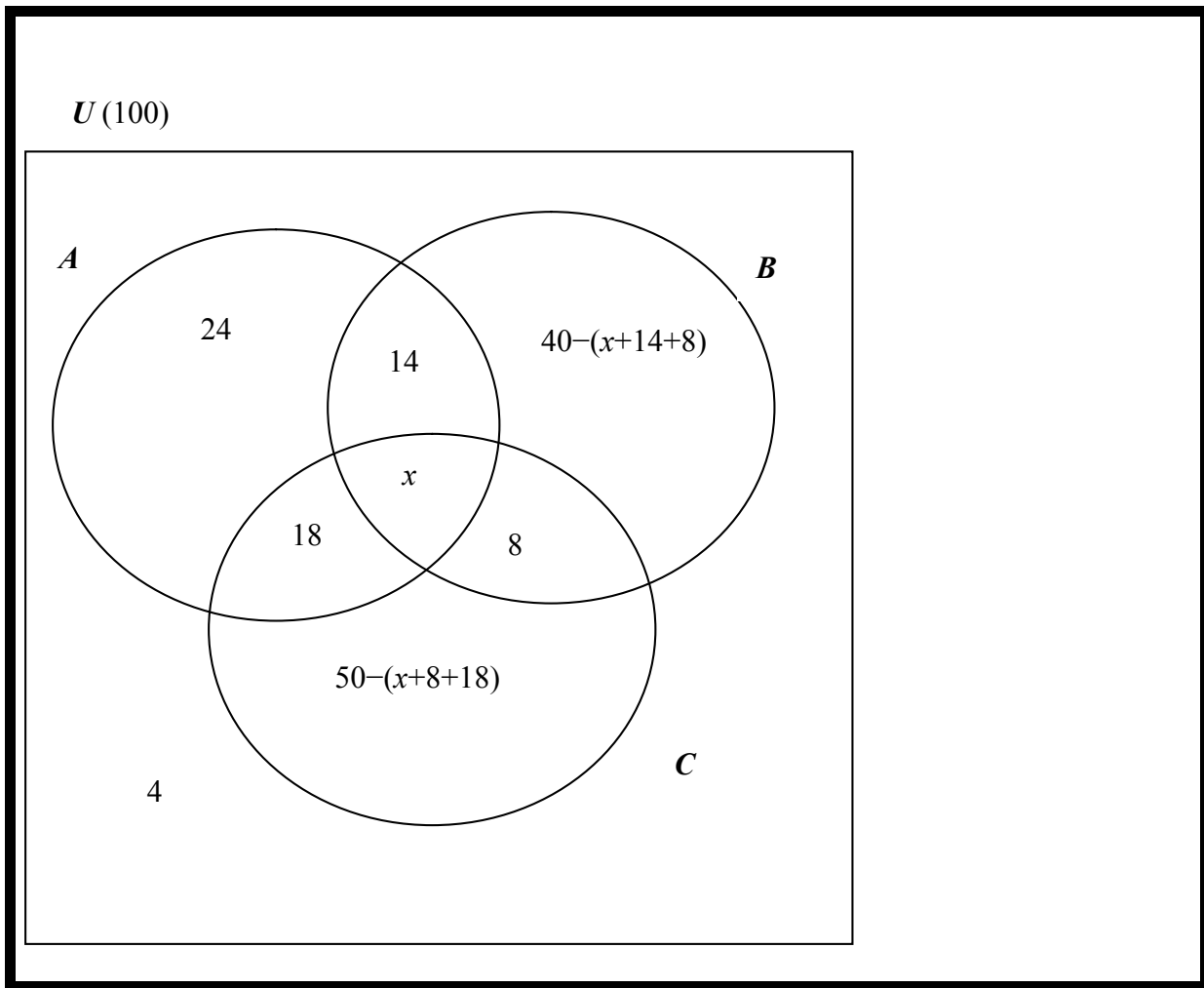
Att 2



or



or



Slips (-1)

- S1 Each incorrect or misplaced or missing entry from the Venn Diagram, to a max of -3
- S2 Universal box not drawn on diagram
- S3 $U = 100$ not indicated on diagram

Attempts (2 marks)

- A1 Any correct entry
- A2 Draws a Venn Diagram of 3 intersecting circles and stops

Worthless (0)

- W1 Diagram of one or two circles, but note A1

(b) (i) Value of x

10 marks

Att 3

I

$$24 + 14 + 18 + x + 18 - x + 8 + 24 - x + 4 = 100$$

$$110 - x = 100$$

$$-x = -10$$

$$x = 10$$

II

$$24 + 14 + 18 + x + 18 - x + 8 + 24 - x = 96$$

$$106 - x = 96$$

$$-x = -10$$

$$x = 10$$

*Accept candidate's work from previous part, provided it does not oversimplify the question

Blunders (-3)

B1 Correct answer, no work shown ✍

B2 Transposition error

B3 Mathematical error

B4 #U not equal to 100 in I

B5 Each missing or incorrect element from previous work in forming equation, to a max of 2; but if equation is oversimplified Att 3 applies

B6 Distribution error

Attempts (3 marks)

A1 Any correct term in forming equation and stops

A2 Any effort to combine terms from Venn Diagram

A3 Oversimplification (e.g. uses 40 and 50 to get $x = -46$ etc.)

Worthless (0)

W1 Incorrect answer, no work shown

(b) (ii)

5 marks

Att 2

| |
|--|
| Ratio B only: C only $18 - x : 24 - x$ $18 - 10 : 24 - 10$ $8 : 14 = 4 : 7$ |
|--|

- * Accept candidate's value of x from previous part
- * Accept $8 : 14$ (or equivalent) for full marks with work

Blunders (-3)

- B1 Correct answer, no work shown ✍
- B2 Value of x from previous part not used
- B3 Mathematical error
- B4 Fails to find ratio, stops at $18 - 10 : 24 - 10$

Slips (-1)

- S1 Finds ratio C only: B only ($14 : 8$ or $7:4$)
- S2 Numerical errors to a max of 3
- S3 Two numbers correct in correct order, with no ratio sign

Attempts (2 marks)

- A1 States $18 - x$ or $24 - x$ or candidate's equivalent from (b)(i) and stops
- A2 Mention of 8 or 14 in this section, or candidate's equivalent. This may appear on the diagram
- A3 Ratio of two numbers

Worthless (0)

- W1 Produces the same diagram as in (b)(i) without relevant work

Part (c)**20(10, 10) marks****Att(3, 3)**

€2000 was invested at $r\%$ for 2 years compound interest.
 A tax of 25% was deducted each year from the interest gained.
 At the end of the first year the investment amounted to €2030, after tax was deducted.

- (i) ✍ Calculate the rate of interest $r\%$.
 (ii) ✍ Find the amount of the investment at the end of 2 years, after tax has been deducted.

(c) (i)**10 marks****Att 3****I**

$$€2030 - €2000 = €30$$

$$€30 = 75\%$$

$$\frac{30}{75} = 0.4 = 1\%$$

$$0.4 \times 100 = €40 = \text{Interest}$$

$$\frac{40}{2000} \times \frac{100}{1}$$

$$\text{Rate of interest } r = 2\%$$

II

$$€2000 \times \frac{r}{100} = 20r$$

$$20r \times \frac{25}{100} = \frac{500r}{100} = 5r$$

$$20r - 5r = 15r$$

$$(\text{or } 20r \times \frac{75}{100} = 15r)$$

$$15r = 30$$

$$r = 2\%$$

* Answer of $r = 1.5\%$ with work is worth 4 marks

* Stops at $15r$ or at €40 is worth 4 marks

* $\frac{40}{2000} \times \frac{100}{1}$ is worth 7 marks

Blunders (-3)

B1 Correct answer, no work shown ✍

B2 Mathematical error

B3 Incorrect operation

B4 Incorrect transposition

B5 Inverted fraction

B6 Expresses % as incorrect fraction and continues

Slips (-1)

S1 Numerical error to a max of 3

Attempts (3 marks)

A1 Finds 30 and stops

A2 Expresses 25% or 75% as a correct fraction and stops

A3 Any relevant step

Worthless (0)

W1 Incorrect answer, no work shown

(c) (ii)

10 marks

Att 3

| |
|--|
| $\begin{aligned} \text{€}2030 \times \frac{2}{100} &= \text{€}40.60 && \text{Interest} \\ \text{€}40.60 \times \frac{25}{100} &= \text{€}10.15 && \text{Tax on interest} \\ \text{€}40.60 - \text{€}10.15 &= \text{€}30.45 && \text{Interest less tax (or } \text{€}40.60 \times \frac{75}{100} = \text{€}30.45) \\ \text{€}2030 + \text{€}30.45 &= \text{€}2060.45 && \text{Value of the investment} \end{aligned}$ |
|--|

* Accept candidate's r from previous part

Blunders (-3)

- B1 Correct answer, no work shown ✍
- B2 Mathematical error
- B3 Decimal error
- B4 Different value of r from previous part (unless worked out again in this part: mark on slip and blunder)
- B5 Mishandles 25% or 75%
- B6 Fails to finish

Slips (-1)

- S1 Numerical error to a max of 3

Attempts (3 marks)

- A1 Some correct effort to find interest before tax
- A2 Some correct effort to simplify 25% or 75%
- A3 Any relevant step


Worthless (0)

- W1 Incorrect answer, no work shown

QUESTION 3

| | | |
|-----------------|----------------------------|---------------------|
| Part (a) | 10 marks | Att 3 |
| Part (b) | 25(10, 5, 10) marks | Att(3, 2, 3) |
| Part (c) | 15(5, 5, 5) marks | Att(2, 2, 2) |


Part (a) **10 marks** **Att 3**

 Write the reciprocal of 10 000 in the form 1×10^n , where $n \in \mathbf{Z}$.

(a) **10 marks** **Att 3**

$$\begin{aligned} \frac{1}{10000} &= \frac{1}{10^4} \text{ (or } 0.0001\text{)} \\ &= 10^{-4} \\ \text{Answer} &= 1 \times 10^{-4} \end{aligned}$$

Blunders (-3)

- B1 Correct answer, no work shown 
- B2 Not in form of 1×10^n , final answer left as 10^{-4} , with work
- B3 Index error e.g. answer given as 1×10^4 , with work
- B4 Final answer given as $1 \times \frac{1}{10^4}$ or 1×0.0001 , with work
- B5 Decimal error

Attempts (3 marks)

- A1 Indicates knowledge of reciprocal
- A2 10^4 without work


Worthless (0)

- W1 Incorrect answer, no work shown, but note A2

Part (b) **20(10, 5, 10) marks** **Att(3, 2, 3)**

A builders' supplier sells two types of copper pipes.
One has a narrow diameter and costs €x per length.
The other has a wider diameter and costs €y per length.
Tony buys 14 lengths of the narrow diameter pipes and 10 lengths of the wider diameter pipes at a cost of €555.
Gerry buys 12 lengths of the narrow diameter pipes and 5 lengths of the wider diameter pipes at a cost of €390.

(i) Write two equations to represent the above information.

(ii)  Solve these equations to find the cost of a length of each type of copper pipe.

(b) (i)

15(10, 5) marks

Att(3, 2)

$$\begin{aligned}14x + 10y &= 555 \\12x + 5y &= 390\end{aligned}$$

- * Two equations to mark in **(b) (i)**
- * Each equation is marked independently of the other; the first is worth 10 marks, with Att 3 for any correct work, the second 5 marks, Att 2.

Blunders (-3)

B1 Incorrect term, once per equation

Attempts (3,2 marks)

A1 $14x$ or $10y$ or $12x$ or $5y$

A2 Effort at creating an equation equal to 555 or 390

(b) (ii)

10 marks

Att 3

I

$$\begin{aligned}14x + 10y &= 555 \\12x + 5y &= 390 \\ & \quad (-2) \quad \mathbf{3\ m} \\14x + 10y &= 555 \\-24x - 10y &= -780 \\-10x &= -225 \quad \mathbf{4m} \\x &= \text{€}22.50 \quad \mathbf{7\ m}\end{aligned}$$

$$\begin{aligned}14(22.5) + 10y &= 555 \\315 + 10y &= 555 \\10y &= 240 \\y &= \text{€}24 \quad \mathbf{10\ m}\end{aligned}$$

II

$$\begin{aligned}14x + 10y &= 555 \quad \times 6 \\12x + 5y &= 390 \quad \times -7 \quad \mathbf{3m} \\86x + 60y &= 3330 \\-84x - 35y &= -2730 \\25y &= 600 \quad \mathbf{4m} \\y &= \text{€}24.00 \quad \mathbf{7m}\end{aligned}$$

$$\begin{aligned}14x + 10(24) &= 555 \\14x + 240 &= 555\end{aligned}$$

$$\begin{aligned}14x &= 315 \\x &= \text{€}22.50 \quad \mathbf{10m}\end{aligned}$$

III

$$\begin{aligned}14x + 10y &= 555 \\12x + 5y &= 390\end{aligned}$$

$$14x = 555 - 10y \quad \mathbf{3m}$$

$$x = \frac{555 - 10y}{14}$$

$$12\left(\frac{555 - 10y}{14}\right) + 5y = 390 \quad (\times 14)$$

$$\begin{aligned}6660 - 120y + 70y &= 5460 \\-50y &= -1200\end{aligned} \quad \mathbf{4m}$$

$$y = \text{€}24.00 \quad \mathbf{7m}$$

$$x = \frac{555 - 10(24)}{14}$$

$$x = \text{€}22.50 \quad \mathbf{10m}$$

IV

$$\begin{aligned}14x + 10y &= 555 \\12x + 5y &= 390\end{aligned}$$

$$5y = 390 - 12x \quad \mathbf{3m}$$

$$y = \frac{390 - 12x}{5}$$

$$14x + 10\left(\frac{390 - 12x}{5}\right) = 555 \quad (\times 5)$$

$$\begin{aligned}70x + 3900 - 120x &= 2775 \\-50x &= -1125\end{aligned} \quad \mathbf{4m}$$

$$x = \text{€}22.50 \quad \mathbf{7m}$$

$$y = \frac{390 - 12(22.5)}{5}$$

$$y = \text{€}24.00 \quad \mathbf{10m}$$

Notes

- * 1. Accept candidate's equations from part **(b)(i)** provided that it does not oversimplify
- * 2. Apply only one blunder deduction in establishing the first equation in terms of x only or the first equation in terms of y only
- *3. Finding the second variable is subject to a maximum deduction of 3 marks
- *4. Correct values without algebraic work, **both verified in both equations** merits **10 marks**
- *5. Correct values without algebraic work **not verified or not fully verified** merits attempt **3 marks**

Blunders (-3)

- B1 Finds one variable only
- B2 Distribution error
- B3 Mathematical error
- B4 Incorrect substitution when finding second variable, but note M1
- B5 Transposition error in solving first variable
- B6 Transposition errors in solving second variable
- B7 Error(s) in establishing the first equation in terms of x only ($-10x = -225$) or the first equation in terms of y only ($25y = 600$) through elimination by cancellation (**I** and **II**)
- B8 Error(s) in establishing the first equation in terms of x only ($-50x = -1125$) or the first equation in terms of y only ($-50y = -1200$) through elimination or by substitution (**III** and **IV**)

Misreadings (-1)

- M1 Misreads digits, provided it doesn't oversimplify answer

Slips (-1)

- S1 Numerical errors to a max of -3

Attempts (3 marks)

- A1 Any correct manipulation of either given equation and stops
- A2 Some correct partial substitution and stops

Worthless (0)

- W1 Incorrect answer, no work shown
- W2 Trial and error, but see *4 and *5 above

Part (c)

15(5, 5, 5)marks

Att (2, 2, 2)

- (i) ✎ Express in its simplest form:

$$\frac{3}{x+1} - \frac{2}{x+4}$$

- (ii) ✎ Hence, or otherwise, solve the equation:

$$\frac{3}{x+1} - \frac{2}{x+4} = \frac{1}{3}$$

giving your answers in the form $a \pm \sqrt{b}$, where $a, b \in \mathbf{N}$.

(c) (i)

5 marks

Att 2

$$\frac{3}{x+1} - \frac{2}{x+4}$$

$$\frac{3(x+4) - 2(x+1)}{(x+1)(x+4)}$$

$$\frac{3x+12-2x-2}{(x+1)(x+4)}$$

$$\frac{x+10}{(x+1)(x+4)}$$

$$\frac{x+10}{x^2+5x+4}$$

* Accept common denominator as $(x+1)(x+4)$. Penalise incorrect multiplication in part (c) (ii).

Blunders (-3)

- B1 Correct answer but no work shown. ✍
- B2 Incorrect denominator.
- B3 Mishandles denominator.
- B4 Mishandles numerator.
- B5 Distribution error, once if consistent
- B6 Mathematical error.
- B7 Fails to combine like terms in final answer.
- B8 Combining unlike terms and continues.
- B9 Reads equation as $\frac{3}{x+1} + \frac{2}{x+4}$.
Continue to apply slips and blunders

Slips (-1)

- S1 Numerical errors to a max of -3.

Attempts (2 marks)

- A1 Identifies common denominator and stops.
- A2 Any correct relevant step and stops.
- A3 No denominator used
- A4 Oversimplification

Worthless (0)

- W1 Incorrect answer and no work shown.

W2 $\frac{3}{x+1} - \frac{2}{x+4} = \frac{1}{2x+5}$

W3 $\frac{3}{x+1} - \frac{2}{x+4} = \frac{1}{5}$ or $\frac{1}{3}$ or $\frac{1}{-3}$ etc

(c) (ii)

10(5, 5) marks

Att(2, 2)

| 5 marks | Att2 | 5 marks | Att2 |
|---|---|-----------------------------------|------|
| Establishing quadratic equation | | Solving quadratic equation | |
| I $\frac{x + 10}{x^2 + 5x + 4} = \frac{1}{3}$ $3(x+10) = 1(x+1)(x+4)$ $3x + 30 = x^2 + x + 4x + 4$ $x^2 + 2x - 26 = 0$ <p style="text-align: right;">5m</p> | $a = 1; b = 2; c = -26$ $x = \frac{-2 \pm \sqrt{(2)^2 - 4(1)(-26)}}{2(1)}$ $x = \frac{-2 \pm \sqrt{4 + 104}}{2}$ $x = \frac{-2 \pm \sqrt{108}}{2}$ $x = \frac{-2 \pm 6\sqrt{3}}{2}$ $-1 \pm 3\sqrt{3} \quad \text{or} \quad 1 \pm 3\sqrt{3} \quad (\text{see } *)$ <p style="text-align: right;">5m</p> | | |
| II $\frac{3}{x + 1} - \frac{2}{x + 4} = \frac{1}{3}$ $3(3)(x + 4) - 2(3)(x + 1) = (x + 1)(x + 4)$ $9x + 36 - 6x - 6 = x^2 + x + 4x + 4$ $x^2 + 2x - 26 = 0$ <p style="text-align: right;">5m</p> | | | |

* Due to a typographical error, “where $a, b \in \mathbb{N}$ ” should have read “where $a, b \in \mathbb{Z}$ ”. Accordingly, accept candidate answers $-1 \pm 3\sqrt{3}$ or $1 \pm 3\sqrt{3}$ for full marks.

* Accept candidate’s equation for solving, provided it doesn’t oversimplify

Blunders (-3)

- B1 Correct answer but no work shown. ✍
- B2 Fails to group or groups incorrectly.
- B3 Combines unlike terms and continues e.g. $3x + 30 = 33$
- B4 Error in transposition.
- B5 Error in quadratic formula (given in tables)
- B6 Error in the application of the quadratic formula
- B7 Finds only one solution.
- B8 Stops at $x = \frac{-2 \pm 6\sqrt{3}}{2}$
- B9 Mathematical error
- B10 Distribution error

Slips (-1)

- S1 Numerical errors to a max of -3.

Attempts (2 marks)

- A1 Any correct multiplication and stops.
- A2 Simplification to a linear equation may merit at most Att 2 marks.
- A3 Solving a linear equation correctly for a single value may merit at most Att 2 marks
- A4 Quadratic formula with some correct substitution
- A5 Any correct relevant step


Worthless (0)

- W1 Incorrect answer and no work shown.

QUESTION 4

| | | |
|-----------------|-----------------------------|------------------------|
| Part (a) | 10 marks | Att 3 |
| Part (b) | 20(10, 10)marks | Att(3, 3) |
| Part (c) | 20(5, 5, 5, 5) marks | Att(2, 2, 2, 2) |

Part (a) **10 marks** **Att 3**


 Solve $3(x - 2) - 5(x - 3) = 1$.

(a) **10 marks** **Att 3**

$$\begin{aligned}3(x - 2) - 5(x - 3) &= 1 \\3x - 6 - 5x + 15 &= 1 \\3x - 5x &= 1 + 6 - 15 \\-2x &= -8 \\2x &= 8 \\x &= 4\end{aligned}$$

* Accept $x = 4$ fully verified in equation for full marks

Blunders (-3)

- B1 Correct answer but no work shown 
- B2 Mathematical error
- B3 Transposition error
- B4 Distribution error

Slips (-1)

- S1 Numerical errors to a max of -3.

Attempts (3 marks)

- A1 Some correct relevant work.
- A2 Tests any value in the equation and stops but note *

Worthless (0)

- W1 Incorrect answer and no work shown.

Part (b)

20(10, 10) marks

Att(3, 3)

(i) ✍ Simplify fully

$$(3x - 4)(2x^2 + 5x - 2).$$

(ii) ✍ List the elements of the solution set of

$$-5 \leq 3x - 2 < 7, \quad x \in \mathbf{Z}.$$

(b) (i)

10 marks

Att 3

$$(3x - 4)(2x^2 + 5x - 2)$$

$$3x(2x^2 + 5x - 2) - 4(2x^2 + 5x - 2) \quad \mathbf{3m}$$

$$6x^3 + 15x^2 - 6x - 8x^2 - 20x + 8 \quad \mathbf{7m}$$

$$6x^3 + 7x^2 - 26x + 8 \quad \mathbf{10m}$$

Blunders (-3)

B1 Correct answer but no work shown. ✍

B2 Mathematical error.

B3 Fails to group or groups incorrectly.

B4 Each incorrect or omitted term.

B5 Distribution error

Slips (-1)

S1 Numerical errors to a max of -3.

Attempts (3 marks)

A1 Some correct relevant work.

A2 Combining unlike terms merits at most attempt mark, subject to marks already secured

Worthless (0)

W1 Incorrect answer and no work shown.

(b) (ii)

10 marks

Att 3

| | | |
|-----------|------------------------------------|-----|
| I | $-5 \leq 3x - 2 < 7$ | |
| | $-5 + 2 \leq 3x < 7 + 2$ | |
| | $-3 \leq 3x < 9$ | |
| | $-1 \leq x < 3$ | 7m |
| | $\{-1, 0, 1, 2\}$ | 10m |
| II | $-5 \leq 3x - 2$ | |
| | $-5 + 2 \leq 3x$ | |
| | $-3 \leq 3x \rightarrow -1 \leq x$ | 4m |
| | and $3x - 2 < 7$ | |
| | $3x < 7 + 2$ | |
| | $3x < 9 \rightarrow x < 3$ | 7m |
| | $\{-1, 0, 1, 2\}$ | 10m |

- * One correct inequality with work is worth 4m (i.e. $-1 \leq x$ **or** $x < 3$)
Two correct inequalities with work is worth 7m (i.e. $-1 \leq x$ **and** $x < 3$
or $-1 \leq x < 3$)
Correct set or list and work is worth 10 marks
- * Accept correct answers indicated on a number line, with work

Blunders (-3)

- B1 Correct answer but no work shown ✍
- B2 Mathematical error
- B3 Mishandles inequality
- B4 Transposition error
- B5 Fails to list.
- B6 Ignores the negative value in the original (i.e. $5 \leq 3x - 2 < 7$ and continues)
- B7 Solves one inequality (B5 may also apply)
- B8 $x \in \mathbf{R}$ indicated

Slips (-1)

- S1 Numerical errors to a max of -3
- S2 Includes the number 3 on the list, but note S3
- S3 Each incorrect or missing number to a max of -3

Misreading (-1)

- M1 Reverses one or both inequality signs
- M2 Omits or includes "equals" incorrectly in inequality, apply once

Attempts (3 marks)

- A1 Tests any value in the inequality and stops

Worthless (0)

- W1 Number line drawn, no correct range or value indicated

Part (c)**20(5, 5, 5, 5) marks****Att(2, 2, 2, 2)**

Rectangular tiles are to be placed side by side on a wall.

Each tile has a length of x cm.

$\frac{300}{x}$ of these tiles are required.

- (i) If each tile was 1 cm longer, write down an expression in x for the number of tiles that would now be required.
- (ii) If the longer tiles were used, the number of tiles required would decrease by 10.

✍ Write an equation in x to represent this information.

- (iii) *✍* Solve this equation to find the value of x .

(c) (i)**5 marks****Att 2**

$$\frac{300}{x+1}$$

Blunders (-3)

B1 Inversion

B2 $x+1$ only

Attempts (2 marks)

A1 Effort to form relevant expression e.g. $\frac{300}{x} + 1$

A2 Uses $x+1$

Worthless (0)

W1 $\frac{300}{x}$ or $\frac{300}{1x}$

(c) (ii)**5 marks****Att 2**

$$\frac{300}{x} - \frac{300}{x+1} = 10 \quad (\text{or equivalent, based on (c) (i)})$$

* Accept candidate's answer from (c) (i) above

Blunders (-3)

B1 Error in setting up equation $\frac{300}{x} + \frac{300}{x+1} = 10$ or $\frac{300}{x+1} - \frac{300}{x} = 10$

B2 Writes correct expression with required terms but no equal sign

Attempts (2 marks)

A1 Must construct an equation or expression using at least two of the following:

10, answer (i), $\frac{300}{x}$

Worthless (0)

W1 $\frac{300}{x}$

(c) (iii)

(5, 5) marks

Att 2,2

$$\frac{300(x+1)-300x}{(x)(x+1)} = 10$$

$$\frac{300x+300-300x}{(x)(x+1)} = 10$$

$$\frac{300}{(x)(x+1)} = 10$$

$$300 = 10(x)(x+1)$$

$$300 = 10(x^2+x) \quad \mathbf{2m}$$

$$30 = x^2 + x \quad \text{or} \quad x^2 + x - 30 = 0 \quad \text{or} \quad 300 = 10x^2 + 10x \quad \mathbf{5m}$$

$$x^2 + x - 30 = 0$$

$$(x+6)(x-5) = 0$$

$$x = -6, x = 5 \quad \mathbf{4m}$$

$$\text{Solution: } x = 5. \quad \mathbf{5m}$$

*Mark in **two** parts : 5 marks for **equation** and 5 marks for **solving**

*Accept candidate's expression from (c) (ii) provided it doesn't oversimplify the question

Blunders (-3)

- B1 Correct answer, no work shown ✍
- B2 Mathematical error in forming equation
- B3 Distribution error
- B4 Transposition error
- B5 Incorrect factors
- B6 Correct factors and stops
- B7 Errors using quadratic formula

Slips (-1)

- S1 Numerical errors to a max of 3
- S2 Stops at $x = -6$, $x = 5$ or concludes $x = -6$

Attempts (2 marks)

- A1 Linear equation in x merits attempt at most
- A2 Any correct relevant step


Worthless (0)

- W1 Incorrect answer and no work shown
- W2 () ()

QUESTION 5

| | | |
|----------|------------------|-----------|
| Part (a) | 5 marks | Att 2 |
| Part (b) | 25(15, 10) marks | Att(5, 3) |
| Part (c) | 20(5, 15) marks | Att(2, 5) |


Part (a) 5 marks Att 2

 Given that $c = \sqrt{y - x}$, write x in terms of c and y .

(a) 5 marks Att 2

$$\begin{aligned}c^2 &= y - x \\c^2 - y &= -x \\x &= y - c^2.\end{aligned}$$

Blunders (-3)

- B1 Correct answer, no work shown 
- B2 Transposition error
- B3 Solves for y
- B4 Square root error
- B5 Mathematical error

Attempts (2 marks)

- A1 Some correct relevant work *e.g.* effort at squaring or effort to isolate x .

Worthless (0)

- W1 Incorrect answer and no work shown
- W2 Interchanges x and c to get $x = \sqrt{y - c}$

Part (b)

25(15, 10) marks

Att(5, 3)

(i) ✎ When $m = \frac{2}{5}$ and $n = \frac{5}{4}$, find the value of $\frac{1}{2m} - \frac{1}{3n}$.
Write your answer in the form $\frac{a}{b}$, where $a, b \in \mathbb{N}$.

(ii) ✎ Use factors to simplify
$$\frac{3x^2 - 19x - 14}{x^2 - 49}$$

(b) (i)

15 marks

Att 5

I

$$\frac{1}{2m} = \frac{1}{2\left(\frac{2}{5}\right)} = \frac{1}{\frac{4}{5}} = \frac{5}{4}$$

$$\frac{1}{3n} = \frac{1}{3\left(\frac{5}{4}\right)} = \frac{1}{\frac{15}{4}} = \frac{4}{15}$$

$$\frac{5}{4} - \frac{4}{15} = \frac{75 - 16}{60} = \frac{59}{60}$$

II
$$\frac{1}{2m} - \frac{1}{3n} = \frac{13n - 2m}{6mn} = \frac{3\left(\frac{5}{4}\right) - 2\left(\frac{2}{5}\right)}{6\left(\frac{2}{5}\right)\left(\frac{5}{4}\right)} = \frac{\frac{15}{4} - \frac{4}{5}}{3} = \frac{\frac{59}{20}}{3} = \frac{59}{60}$$

Blunders (-3)

- B1 Correct answer, no work shown ✎
- B2 Answer not in correct form $\frac{a}{b}$ (e.g. .9833333333 decimal answer). May also incur other blunders
- B3 Incorrect denominator or mishandles denominator
- B4 Error in multiplying fractions
- B5 Error in subtracting fractions
- B6 Error in dividing fractions
- B7 Mathematical error
- B8 Substitution error, but note M1

Misreading (-1)

- M1 Swaps values of m and n when substituting

Slips (-1)

S1 Numerical errors to a max of 3

Attempts (5 marks)

A1 Finds common denominator and stops

A2 Some correct substitution

A3 Effort to subtract candidate's values of $\frac{1}{3n}$ from $\frac{1}{2m}$

Worthless (0)

W1 Incorrect answer and no work shown

W2 0.4 and/or 1.25, but note A2

(b) (ii)

10 marks

Att 3

I

$$\frac{3x^2 - 19x - 14}{x^2 - 49} = \frac{(3x + 2)(x - 7)}{(x + 7)(x - 7)} = \frac{(3x + 2)}{(x + 7)}$$

II

$$\frac{3x^2 - 19x - 14}{x^2 - 49} = \frac{3x^2 - 21x + 2x - 14}{(x + 7)(x - 7)} = \frac{3x(x - 7) + 2(x - 7)}{(x + 7)(x - 7)} = \frac{(3x + 2)(x - 7)}{(x + 7)(x - 7)} = \frac{(3x + 2)}{(x + 7)}$$

* 1 $\frac{(3x-2)(x+7)}{(x+7)(x-7)}$ and continues is one blunder

* 2 Candidate may use quadratic to solve numerator = 0. $x = 7$ and $x = -\frac{2}{3}$ \Rightarrow
($x-7$)($3x + 2$) and continues.

Blunders (-3)

- B1 Correct answer, no work shown ✍
- B2 Incorrect factors of denominator
- B3 Incorrect factors $3x^2$
- B4 Incorrect factors of -14
- B5 Incorrect factors, leading to an incorrect middle term
- B6 Fails to finish
- B7 Blunder in quadratic
- B8 Substitution error in quadratic

Attempts (3 marks)

- A1 Sets up factors or sets up quadratic, identifies a , b or c
- A2 Finds guide number or a relevant number **II**
- A3 Uses formula and stops at roots
- A4 Mentions difference of 2 squares
- A5 Any correct relevant step
- A6 Quadratic with some correct substitution. (See *2)

Worthless (0)

- W1 Incorrect answer and no work shown
- W2 () ()

Part (c)

20 (5, 15) marks

Att (2, 5)

Let f be the function $f: x \rightarrow -x^2 - 4x + 5, x \in \mathbf{R}$.

- (i) ✍ Find the co-ordinates of the points where the graph of $f(x)$ cuts the x -axis.
- (ii) ✍ Solve $f(x) = f(x + 1)$.

(c) (i)

5 marks

Att 2

$$\text{I } -x^2 - 4x + 5 = 0$$

$$(-x - 5)(x - 1) = 0$$

$$-x = 5 \quad x - 1 = 0$$

$$x = -5 \quad x = 1$$

Cuts the x -axis at $(-5, 0)$ and $(1, 0)$.

$$\text{II } -x^2 - 4x + 5 = 0$$

$$a = -1, b = -4, c = 5$$

$$x = \frac{-b \pm \sqrt{b^2 - 4ac}}{2a} = \frac{-(-4) \pm \sqrt{(-4)^2 - 4(-1)(5)}}{2(-1)} = \frac{4 \pm \sqrt{36}}{-2} = \frac{4 \pm 6}{-2} = -5 \text{ and } 1$$

Cuts the x -axis at $(-5, 0)$ and $(1, 0)$

- * Accept $x^2 + 4x - 5 = 0$ solved correctly using I or II for full marks
- * The two correct x values verified fully by trial and error = full marks
- * Accept graph with points of intersection indicated correctly, *with work*

Blunders (-3)

- B1 Correct answer, no work shown ✍
- B2 Incorrect factors of $-x^2$
- B3 Incorrect factors of 5
- B4 Incorrect factors leading to an incorrect middle term
- B5 Transposition error
- B6 Mathematical error
- B7 Fails to find roots
- B8 Graph showing correct points of intersection, no work otherwise

Slips (-1)

- S1 Numerical errors to a max of 3
- S2 Does not state co-ordinates, apply once

Attempts (2 marks)

- A1 Some correct relevant work
- A2 Tries to set up factors
- A3 Quadratic with some correct substitution
- A4 Correct x value(s) without algebraic work, not fully verified or not verified
- A5 $(0,5)$ or $y = 5$ stated (where graph cuts the y axis)

Worthless (0)

W1 Incorrect answer and no work shown

W2 Trial and error of x values other than $x = -5$ and $x = 1$

W3 States $x = 5$, no work

W4 () ()

(c) (ii)

15 marks

Att 5

$$f(x) = -x^2 - 4x + 5$$

$$f(x + 1) = -(x + 1)^2 - 4(x + 1) + 5$$

$$-(x^2 + 2x + 1) - 4x - 4 + 5$$

$$-x^2 - 2x - 1 - 4x + 1$$

$$-x^2 - 6x$$

$$f(x) = f(x + 1)$$

$$-x^2 - 4x + 5 = -x^2 - 6x$$

$$-x^2 - 4x + 5 + x^2 + 6x = 0$$

$$2x + 5 = 0$$

$$2x = -5$$

$$x = -\frac{5}{2}$$

*Accept $x = -2.5$ fully verified in $f(x) = f(x + 1)$ for full marks

Blunders (-3)

B1 Correct answer, no work shown ✍

B2 Mathematical error

B3 Substitution error, provided it does not oversimplify question

B4 Distribution error

B5 Error in squaring

B6 Transposition error

Slips (-1)

S1 Numerical errors to a max of 3

Attempts (5 marks)

A1 Some correct relevant substitution

Worthless (0)

W1 Incorrect answer and no work shown

W2 $f(x) = f(x + 1)$

W3 $x = x + 1$, even if continued

QUESTION 6

| | | |
|----------|------------------------|-----------------|
| Part (a) | 5 marks | Att 2 |
| Part (b) | 30(10, 10, 5, 5) marks | Att(3, 3, 2, 2) |
| Part (c) | 15(5, 5, 5) marks | Att(2, 2, 2) |

| | | |
|----------|---------|-------|
| Part (a) | 5 marks | Att 2 |
|----------|---------|-------|

Let h be the function $h : x \rightarrow \sqrt{x+4}$.

Show that $h(0) > h(-4)$.

| | | |
|-----|---------|-------|
| (a) | 5 marks | Att 2 |
|-----|---------|-------|

$$h(0) = \sqrt{0+4} = \sqrt{4} = 2 \quad 2\text{m}$$

$$h(-4) = \sqrt{-4+4} = \sqrt{0} = 0 \quad 2\text{m}$$

$$h(0) > h(-4) \text{ or } 2 > 0 \quad 5\text{m}$$

Blunders (-3)

- B1 Correct answer (*i.e.* $2 > 0$), no work shown
- B2 Incorrect $h(0)$
- B3 Incorrect $h(-4)$
- B4 $\sqrt{4} = -2$ leading to incorrect conclusion
- B5 Fails to finish

Attempts (2 marks)

- A1 Some correct relevant substitution

Worthless (0)


- W1 Incorrect answer and no work of merit
- W2 $h(0) > h(-4)$
- W3 $0 > -4$ and no work of merit

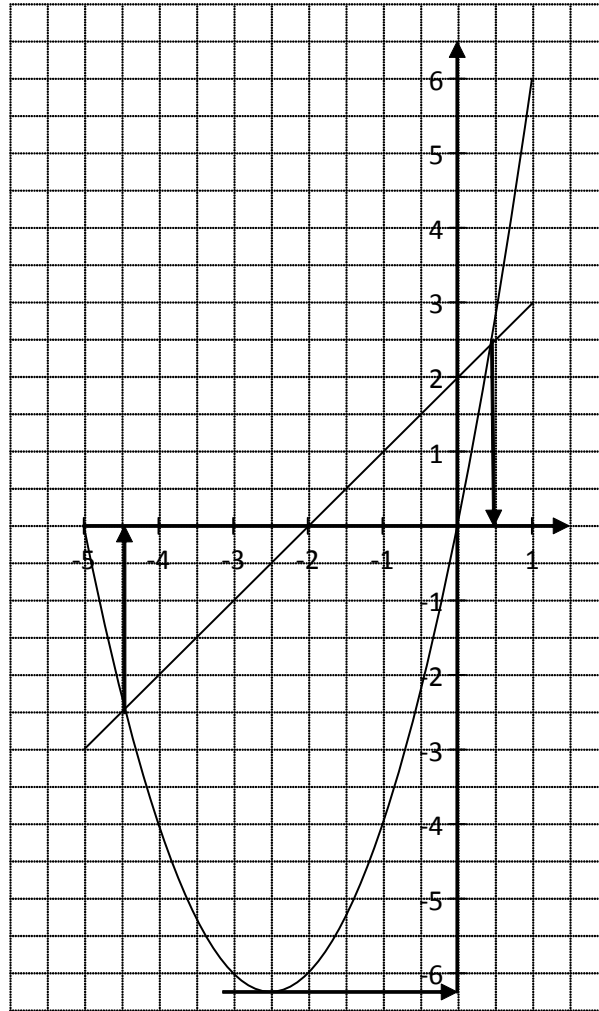
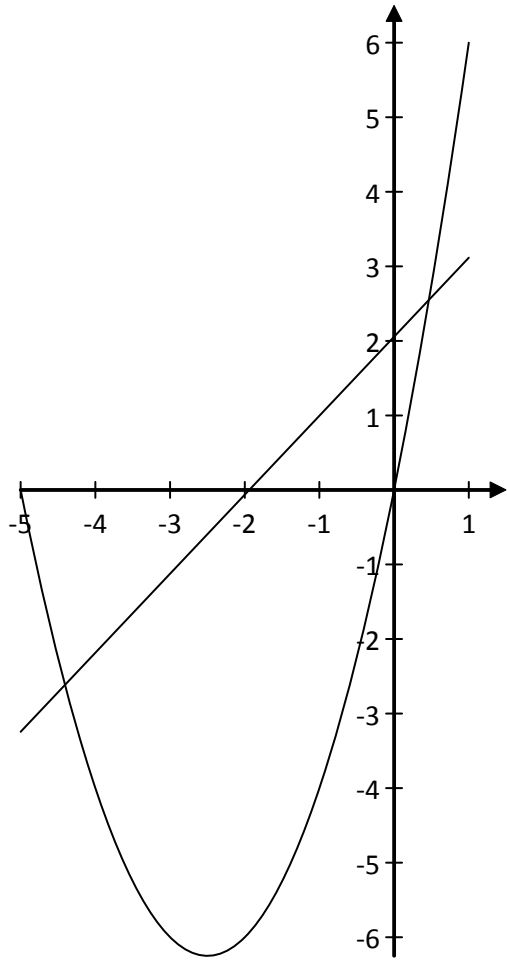
Part (b)

30(10, 10, 5, 5) marks

Att(3, 3, 2, 2)

Let f be the function $f: x \rightarrow x^2 + 5x$ and let g be the function $g: x \rightarrow x + 2$.

 Using the same axes and scales, draw the graph of f and the graph of g , for $-5 \leq x \leq 1$, $x \in \mathbf{R}$.




or

(b) Function f **20 (10, 10) marks****Att (3, 3)**

$f: x \rightarrow x^2 + 5x$

| | | | | | | | |
|--------|-----|-----|-----|-----|----|---|---|
| x | -5 | -4 | -3 | -2 | -1 | 0 | 1 |
| x^2 | 25 | 16 | 9 | 4 | 1 | 0 | 1 |
| $+5x$ | -25 | -20 | -15 | -10 | -5 | 0 | 5 |
| $f(x)$ | 0 | -4 | -6 | -6 | -4 | 0 | 6 |

- * Table is worth 10 marks, graph is 10 marks
- * Middle lines of table do not have to be shown
- * Candidate may choose not to use a table.
- * Points might not be listed, mark on position on graph
- * Graph constitutes work in this question 

Blunders (-3)

- B1 Error in calculating x^2 , if consistent penalise once, but note A3
- B2 Error in calculating $5x$, if consistent penalise once
- B3 Error in calculating last line of table, once if consistent
- B4 Each incorrect point without work
- B5 Point plotted incorrectly, once only if consistent
- B6 Incomplete domain
- B7 Axes scaled incorrectly, once only
- B8 Reversed axes
- B9 No curve between $(-3, -6)$ and $(-2, -6)$ on graph

Slips (-1)

- S1 Numerical errors to a max of 3

Attempts (3, 3 marks)

- A1 Some correct substitution
- A2 Draws axes, with some indication of scaling
- A3 Error leading to a linear graph

(b) Function g**10 (5, 5) marks****Att (2, 2)**

$g: x \rightarrow x + 2.$

| | | | | | | | |
|--------|----|----|----|----|----|---|---|
| x | -5 | -4 | -3 | -2 | -1 | 0 | 1 |
| +2 | 2 | 2 | 2 | 2 | 2 | 2 | 2 |
| $g(x)$ | -3 | -2 | -1 | 0 | 1 | 2 | 3 |

- * Table is worth 5 marks, graph is 5 marks
- * In $g(x)$ function only 2 points are necessary in calculation; graph must be drawn from -5 to 1
- * Middle lines of table do not have to be shown
- * Candidate may choose not to use a table.
- * Points might not be listed, mark on position on graph
- * Graph constitutes work in this question ✍

Blunders (-3)

- B1 Graphs not drawn on the same axes or scales (apply once only)
- B1 Error in “ x ” line
- B2 Error in “2” line
- B3 Error in calculating last line of table, once if consistent
- B4 Each incorrect point without work
- B5 Point plotted incorrectly, once only if consistent
- B6 Incomplete domain
- B8 Axes scaled incorrectly
- B9 Reversed axes, but if already blundered, do not penalise again

Slips (-1)

- S1 Numerical errors to a max of 3

Attempts (2,2 marks)

- A1 Some correct substitution
- A2 Draws axes, with some indication of scaling

Part (c)

15(5, 5, 5) marks

Att(2, 2, 2)

Use your graphs from part **(b)** to estimate:

- (i)** ✎ The minimum value of $f(x)$
- (ii)** ✎ The values of x for which $f(x) = g(x)$
- (iii)** The range of values of x for which $f(x) \leq g(x)$.

(c) (i)

5 marks

Att 2

The minimum value of $f(x) = -6.25$

(c) (ii)

5 marks

Att 2

$f(x) = g(x)$ at $x = 0.5$ and $x = -4.5$

(c) (iii)

5 marks

Att 2

The range of values of x for which $f(x) \leq g(x)$.
 $-4.5 \leq x \leq 0.5$

* Apply marks to parts **(c) (i) (ii) and (iii)**

*Accept “from -4.5 to $.5$ ” for **(c) (iii)**

Blunders (-3)

B1 Value(s) not consistent with candidate’s graph, tolerance $\pm .2$

B2 Fails to use graph

B3 y values given instead of x values **(ii) and (iii)**

B4 x value only given instead of $f(x)$ in **(c) (i)**

Slips (-1)

S1 In **(c) (i)** answer given as minimum point instead of minimum value

S2 In **(c) (iii)** “ $<$ ” given instead of “ \leq ” or states “**between** -4.5 and $.5$ ”

Misreading (-1)

M1 $f(x) \geq g(x)$

Attempts (2 marks)

A1 Some correct substitution

A2 Some correct indication of answer on graph

BONUS MARKS FOR ANSWERING THROUGH IRISH

Bonus marks are applied separately to each paper as follows:

If the mark achieved is 225 or less, the bonus is 5% of the mark obtained, rounded *down*.
(e.g. 198 marks \times 5% = 9.9 \Rightarrow bonus = 9 marks.)

If the mark awarded is above 225, the following table applies:

| Bunmharc (Marks obtained) | Marc Bónais (Bonus Mark) | Bunmharc (Marks obtained) | Marc Bónais (Bonus Mark) |
|------------------------------|-----------------------------|------------------------------|-----------------------------|
| 226 | 11 | 261 – 266 | 5 |
| 227 – 233 | 10 | 267 – 273 | 4 |
| 234 – 240 | 9 | 274 – 280 | 3 |
| 241 – 246 | 8 | 281 – 286 | 2 |
| 247 – 253 | 7 | 287 – 293 | 1 |
| 254 – 260 | 6 | 294 – 300 | 0 |



Coimisiún na Scrúduithe Stáit
State Examinations Commission

**JUNIOR CERTIFICATE
EXAMINATION**

2010

MARKING SCHEME

**MATHEMATICS
HIGHER LEVEL
PAPER 2**

MARKING SCHEME
JUNIOR CERTIFICATE EXAMINATION 2010
MATHEMATICS - HIGHER LEVEL - PAPER 2

GENERAL GUIDELINES FOR EXAMINERS

1. Penalties of three types are applied to candidates' work as follows:

- Blunders - mathematical errors/omissions (-3)
- Slips- numerical errors (-1)
- Misreadings (provided task is not oversimplified) (-1).

Frequently occurring errors to which these penalties must be applied are listed in the scheme. They are labelled: B1, B2, B3,..., S1, S2,..., M1, M2,...etc. These lists are not exhaustive.

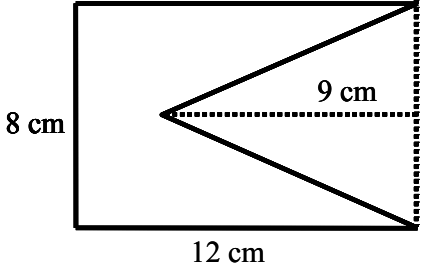
2. When awarding attempt marks, e.g. Att(3), note that
 - any *correct, relevant* step in a part of a question merits at least the attempt mark for that part
 - if deductions result in a mark which is lower than the attempt mark, then the attempt mark must be awarded
 - a mark between zero and the attempt mark is never awarded.
3. Worthless work is awarded zero marks. Some examples of such work are listed in the scheme and they are labelled as W1, W2,...etc.
4. The phrase "hit or miss" means that partial marks are not awarded – the candidate receives all of the relevant marks or none.
5. The phrase "and stops" means that no more work is shown by the candidate.
6. Special notes relating to the marking of a particular part of a question are indicated by an asterisk. These notes immediately follow the box containing the relevant solution.
7. The sample solutions for each question are not intended to be exhaustive lists – there may be other correct solutions.
8. Unless otherwise indicated in the scheme, accept the best of two or more attempts – even when attempts have been cancelled.
9. The *same* error in the *same* section of a question is penalised *once* only.
10. Particular cases, verifications and answers derived from diagrams (unless requested) qualify for attempt marks at most.
11. A serious blunder, omission or misreading results in the attempt mark at most.
12. Do not penalise the use of a comma for a decimal point, e.g. €5.50 may be written as €5,50.

QUESTION 1

| | | |
|-----------------|---------------------------|---------------------|
| Part (a) | 10 marks | Att 3 |
| Part (b) | 20(5, 5, 10) marks | Att(2, 2, 3) |
| Part (c) | 20(10, 10) marks | Att(3, 3) |

Part (a) **10 marks** **Att 3**

The diagram shows a rectangular piece of cardboard with a triangular section cut out.



\pencil Calculate the area of the cardboard.

(a) **10 marks** **Att 3**

The area of the rectangle = $12 \times 8 = 96 \text{ cm}^2$ Step 1

The area of the triangle = $\frac{1}{2}(8 \times 9) = 36 \text{ cm}^2$ Step 2

\therefore The area of the cardboard = $96 - 36 = 60 \text{ cm}^2$ Step 3

or

Divide the cardboard into a rectangle of length 3, width 8 and two right angled triangles of base 4, height 9.

The area of the rectangle = $3 \times 8 = 24 \text{ cm}^2$ Step 1

The area of the two triangles = $2 \cdot \frac{1}{2}(4 \times 9) = 36 \text{ cm}^2$ Step 2

\therefore The area of the cardboard = $24 + 36 = 60 \text{ cm}^2$ Step 3

Blunders (-3)

- B1 Correct answer without work shown (\pencil)
- B2 Incorrect relevant formula
- B3 Failure to subtract/add

Slips (-1)

- S1 Arithmetic slips to a maximum of (-3)

Attempts (3 marks)

- A1 Area rectangle = $l \times b$
- A2 Area triangle = $\frac{1}{2}$ base \times perpendicular height , with some substitution

Worthless (0)

- W1 Volume formula
- W2 Perimeter formula

Part (b)**20(5, 5, 10) marks****Att(2, 2, 3)**

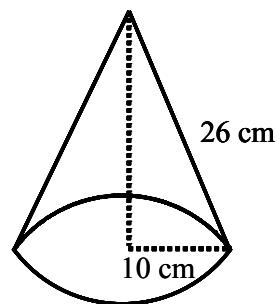
A cone has a slant height of 26 cm and a radius of 10 cm.

- (i) ✍ Find the curved surface area of the cone, in terms of π .

The curved surface area of the cone is doubled, while the slant height remains the same.

- (ii) ✍ Find the radius and hence the vertical height of this cone, correct to the nearest cm.

- (iii) ✍ Show that the volume of this cone is more than double the volume of the cone part (i).

**(b) (i)****5 marks****Att 2**

$$\begin{aligned}\text{Curved surface area} &= \pi r l \\ &= \pi(10)(26) \\ &= 260\pi \text{ cm}^2\end{aligned}$$

Blunders (-3)

- B1 Correct answer without work shown (✍)
B2 Incorrect relevant area formula
B3 $r \neq 10$
B4 $l \neq 26$

Slips (-1)

- S1 Arithmetic slips to a maximum of (-3)
S2 Answer not in terms of π

Attempts (2 marks)

- A1 Correct formula with some substitution

Worthless (0)

- W1 Volume of cone

(b) (ii)

5 marks

Att 2

$$\text{Curved surface area} = 2(260\pi) = 520\pi$$

$$\Rightarrow \pi r l = 520\pi$$

$$\Rightarrow \pi r(26) = 520\pi$$

$$\Rightarrow r = 20$$

$$l^2 = h^2 + r^2$$

$$\Rightarrow 26^2 = h^2 + 20^2$$

$$\Rightarrow 676 = h^2 + 400$$

$$\Rightarrow h^2 = 276$$

$$\Rightarrow h = 16.6 = 17 \text{ cm}$$

* Accept candidate's answer from (b) (i)

Blunders (-3)

- B1 Correct answer without work shown (✍)
- B2 Incorrect substitution into correct formula
- B3 Incorrect relevant formula
- B4 Curved surface area $\neq 520\pi$ or candidate's equivalent
- B5 $h^2 = 276$ and stops
- B6 $\sqrt{276} \neq 16.6$
- B7 Incorrect squaring

Slips (-1)

- S1 Arithmetic slips to a maximum of (-3)
- S2 Answer for h not rounded off or incorrectly rounded

Misreadings (-1)

- M1 Slant height doubled and curved surface area the same

Attempts (2 marks)

- A1 r only
- A2 $l^2 = h^2 + r^2$
- A3 Curved surface area = 520π or candidate's equivalent
- A4 Correct formula with some substitution

Worthless (0)

- W1 Volume formula

(b) (iii)

10 marks

Att 3

$$\text{Original cone: } l^2 = h^2 + r^2$$

$$\Rightarrow 26^2 = h^2 + 10^2$$

$$\Rightarrow 676 = h^2 + 100$$

$$\Rightarrow h^2 = 576$$

$$\Rightarrow h = 24$$

$$\text{Volume of original cone} = \frac{1}{3}\pi r^2 h$$

$$= \frac{1}{3}\pi(10)^2(24)$$

$$= 800\pi \quad (2513 \cdot 27) \text{ cm}^3$$

Step 1

$$\text{Volume of new cone} = \frac{1}{3}\pi r^2 h$$

$$= \frac{1}{3}\pi(20)^2(17) \text{ or } \frac{1}{3}\pi(20)^2(16 \cdot 6)$$

$$= 2266\frac{2}{3}\pi \text{ or } 2213\frac{1}{3}\pi \quad (7120 \cdot 94 \text{ or } 6953 \cdot 39)$$

Step 2

$$2266\frac{2}{3}\pi > 2(800\pi) \text{ or } 2213\frac{1}{3}\pi > 2(800\pi) \text{ or } 2266\frac{2}{3} > 2(800) \text{ or } 2213\frac{1}{3} > 2(800)$$

$$(7120 \cdot 94 / 6953 \cdot 39 > 2(2513 \cdot 27))$$

Step 3

* Accept candidate's answer from (b) (ii)

Blunders (-3)

- B1 Correct answer without work shown (✍)
- B2 Incorrect relevant formula
- B3 Incorrect h for either cone
- B4 Incorrect r for either cone
- B5 Incorrect squaring
- B6 Volume of original cone not doubled or equivalent

Slips (-1)

- S1 Arithmetic slips to a maximum of (-3)
- S2 No conclusion or incorrect conclusion

Attempts (3 marks)

- A1 $l^2 = h^2 + r^2$
- A2 h only
- A3 Correct formula with some substitution

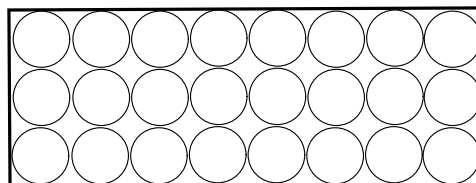
Worthless (0)

- W1 Curved surface area

A vitamin capsule is in the shape of a cylinder with hemispherical ends. The length of the capsule is 20 mm and the diameter is 6 mm.

- (i) ✎ Calculate the volume of the capsule, giving your answer correct to the nearest mm^3 .

A course of these vitamins consists of 24 capsules. The capsules are stacked in three rows of eight in a box as shown in the diagram.



- (ii) ✎ How much of the internal volume of the box is not occupied by the capsules.

(c) (i)

10 marks

Att 3

Volume of cylindrical part = $\pi r^2 h$

$$= \pi(3)^2(14)$$

$$= 126\pi \text{ or } 395.84 \text{ mm}^3$$

Step 1

Volume of hemispherical ends = $2\left(\frac{2}{3}\pi r^3\right)$

$$= \frac{4}{3}\pi(3)^3$$

$$= 36\pi \text{ or } 113.10 \text{ mm}^3$$

Step 2

Volume of capsule = $126\pi + 36\pi$ or $295.84 + 113.10$

$$= 162\pi = 508.94$$

$$= 509 \text{ mm}^3$$

Step 3

* Accept $\pi = 3.14$ or $\frac{22}{7}$

Blunders (-3)

- B1 Correct answer without work shown (✎)
- B2 Incorrect substitution into correct formula
- B3 Incorrect relevant volume formula
- B4 Incorrect h
- B5 Incorrect r
- B6 Error in indices, once only
- B7 Answer in terms of π
- B8 Value of π which affects the accuracy of the answer

Slips (-1)

- S1 Arithmetic slips to a maximum of (-3)
- S2 Answer not rounded off or incorrectly rounded

Attempts (3 marks)

- A1 Volume of hemisphere = $\frac{2}{3}\pi r^3$
- A2 $r = 3$
- A3 $h = 14$
- A4 Effort at calculating the volume of either the cylinder or hemisphere/sphere

Worthless (0)

- W1 Area formula for both the cylinder and hemisphere/sphere

(c) (ii)

10 marks

Att 3

| | |
|--|--------|
| Volume of box = lbh = $(48)(18)(20)$ = 17280 mm^3 | Step 1 |
| Volume of 24 capsules = $24(509)$ = 12216 mm^3 | Step 2 |
| \therefore Unoccupied volume = $17280 - 12216 = 5064 \text{ mm}^3$ | Step 3 |

- * Accept candidate's answer from (c) (i)

Blunders (-3)

- B1 Correct answer without work shown (\neq)
- B2 Incorrect relevant volume formula
- B3 $l \neq 48$
- B4 $b \neq 18$
- B5 $h \neq 20$
- B6 Failure to subtract

Slips (-1)

- S1 Arithmetic slips to a maximum of (-3)

Attempts (3 marks)

- A1 $l = 48$
- A2 $b = 18$
- A3 $h = 20$
- A4 Volume = $l \times b \times h$
- A5 Multiplication by 24

Worthless (0)

- W1 Area of rectangle

QUESTION 2

| | | |
|-----------------|---------------------------|---------------------|
| Part (a) | 10 marks | Att 3 |
| Part (b) | 20(5, 10, 5) marks | Att(2, 3, 2) |
| Part (c) | 20(10, 5, 5) marks | Att(3, 2, 2) |

Part (a) **10 marks** **Att 3**

$M(-1, 2)$ is the midpoint of $[PQ]$ and P is the point $(-2, -4)$.

\neq Find the co-ordinates of Q .

(a) **10 marks** **Att 3**

| | | |
|---|-----------|---|
| $P \rightarrow M = M \rightarrow Q$ $P(-2, -4) \rightarrow M(-1, 2)$ $x : +1 \quad y : +6$ $M(-1, 2) \rightarrow (0, 8)$ $\therefore Q(0, 8)$ | or | <p style="text-align: right;">Let $P = (x, y)$</p> $M = \text{Midpoint } [PQ] = \left(\frac{x_1 + x_2}{2}, \frac{y_1 + y_2}{2} \right)$ $= \left(\frac{-2 + x}{2}, \frac{-4 + y}{2} \right)$ $\Rightarrow \frac{-2 + x}{2} = -1 \text{ and } \frac{-4 + y}{2} = 2$ $\Rightarrow x = 0 \text{ and } y = 8$ $\therefore Q(0, 8)$ |
|---|-----------|---|

Blunders (-3)

- B1 Correct answer without work shown (\neq)
- B2 Incorrect relevant formula
- B3 Both x and y switched in substitution
- B4 Error in translation
- B5 Q taken as midpoint of $[MP]$
- B6 One coordinate only
- B7 Wrong translation

Slips (-1)

- S1 Arithmetic slips to a maximum of (-3)
- S2 One incorrect substitution for x or y

Attempts (3 marks)

- A1 Correct formula with some substitution
- A2 Effort at translation
- A3 Graphical solution or effort at graphical solution

Worthless (0)

- W1 Incorrect formula with or without substitution

Part (b)**20(5, 10, 5) marks****Att(2, 3, 2)** l is the line $2x - y + 6 = 0$.**(i)** ✍ Find the slope of l .**(ii)** ✍ Find the equation of the line m through $(5, 1)$ perpendicular to the line l .**(iii)** ✍ T is the point of intersection between l and m .
Find the coordinates of T .**(b) (i)****5 marks****Att 2**

| | | |
|----------------------------------|----------------------------|--------------------------------|
| | $2x - y + 6 = 0$ | $(0,6) (-3,0)$ or other points |
| Slope of $l = -\frac{2}{-1} = 2$ | or | |
| | $\Rightarrow -y = -2x - 6$ | or |
| | $\Rightarrow y = 2x + 6$ | $m = \frac{0 - 6}{-3 - 0}$ |
| | $\therefore m = 2$ | $= 2$ |

Blunders (-3)

- B1 Correct answer without work shown (✍)
- B2 Error in transposition
- B3 Incorrect relevant formula
- B4 Incorrect point on the line

Slips (-1)

- S1 Arithmetic slips to a maximum of (-3)
- S2 One incorrect substitution for x or y

Attempts (2 marks)

- A1 Indication of $x = 0$ on the y axis and/or $y = 0$ on the x axis
- A2 Attempt at finding a point on the line
- A3 Correct formula with some substitution
- A4 Slope = $-\frac{a}{b}$

Worthless (0)

- W1 Incorrect formula with or without substitution

(b) (ii)

10 marks

Att 3

$$\text{Slope of } m = -\frac{1}{2}$$

Equation of m :

$$y - y_1 = m(x - x_1)$$

$$y - 1 = -\frac{1}{2}(x - 5)$$

$$2y - 2 = -x + 5$$

$$x + 2y - 7 = 0$$

* Accept candidate's answer from part (i)

Blunders (-3)

- B1 Correct answer without work shown (✍)
- B2 Incorrect relevant formula
- B3 Switches both x and y in substitution
- B4 Incorrect slope

Slips (-1)

- S1 Arithmetic slips to a maximum of (-3)
- S2 One incorrect substitution for x or y

Attempts (3 marks)

- A1 Indication that the product of the slopes of perpendicular lines is -1
- A2 Correct formula with some substitution

Worthless (0)

- W1 Incorrect formula with or without substitution

(b) (iii)

5 marks

Att 2

$$2l : 4x - 2y = -12$$

$$m : x + 2y = 7$$

$$2l + m : 5x = -5$$

$$\Rightarrow x = -1$$

$$\text{Substitution for } x \text{ into } m : -1 + 2y = 7$$

$$\Rightarrow 2y = 8$$

$$\Rightarrow y = 4$$

$$\therefore T(-1,4)$$

or

$$l : y = 2x + 6$$

$$\text{Substitution for } y \text{ into } m : x + 2(2x + 6) = 7$$

$$5x + 12 = 7$$

$$5x = -5$$

$$x = -1$$

$$\text{Substitution for } x \text{ into } m : -1 + 2y = 7$$

$$\Rightarrow 2y = 8$$

$$\Rightarrow y = 4$$

$$\therefore T(-1,4)$$

* Accept candidate's answer from part (ii)

Blunders (-3)

B1 Correct answer without work shown (✍)

B2 Error in transposition

B3 Second value not found

Slips (-1)

S1 Arithmetic slips to a maximum of (-3)

Misreadings (-1)

M1 One value found and incorrectly substituted

Attempts (2 marks)

A1 Any correct step

A2 Graphical solution or attempt at a graphical solution – e.g. let $x = 0$ and/or $y = 0$

Part (c)**20(10, 5, 5) marks****Att(3, 2, 2)**

A is the point $(1, -3)$, B is the point $(-2, 1)$, C is the point $(4, -2)$.
 $D(2, -1)$ is a point on the line BC .

- (i) ✍ Show that AD is perpendicular to BC .
(ii) ✍ Find $|BC|$.
(iii) ✍ Given that $|AD| = \sqrt{5}$, find the area of the triangle ABC .

(c) (i)**10 marks****Att 3**

$$\text{Slope } AD = \frac{y_2 - y_1}{x_2 - x_1} = \frac{-1 - (-3)}{2 - 1} = \frac{2}{1} \text{ or } 2 \quad \text{Step 1}$$

$$\text{Slope } BC = \frac{y_2 - y_1}{x_2 - x_1} = \frac{-2 - 1}{4 - (-2)} = \frac{-3}{6} \text{ or } -\frac{1}{2} \quad \text{Step 2}$$

$$2 \times -\frac{1}{2} = -1 \quad \text{Step 3}$$

$\therefore AD \perp BC$

or

$$|AD| = \sqrt{(2-1)^2 + (-1-(-3))^2} = \sqrt{(1)^2 + (2)^2} = \sqrt{5} \quad \text{Step 1}$$

$$|CD| = \sqrt{(4-2)^2 + (-2-(-1))^2} = \sqrt{(2)^2 + (-1)^2} = \sqrt{5}$$

$$|AC| = \sqrt{(4-1)^2 + (-2-(-3))^2} = \sqrt{(3)^2 + (1)^2} = \sqrt{10} \quad \text{Step 2}$$

$$|AD|^2 + |CD|^2 = 5 + 5 = 10 = |AC|^2 \quad \text{Step 3}$$

$\Rightarrow \triangle ADC$ is right angled by Pythagoras' Theorem, with $AD \perp DC$

$\therefore AD \perp BC$

or

$$|AD| = \sqrt{(2-1)^2 + (-1-(-3))^2} = \sqrt{(1)^2 + (2)^2} = \sqrt{5} \quad \text{Step 1}$$

$$|BD| = \sqrt{(2-(-2))^2 + (-1-1)^2} = \sqrt{(4)^2 + (-2)^2} = \sqrt{20}$$

$$|AB| = \sqrt{(-2-1)^2 + (1-(-3))^2} = \sqrt{(-3)^2 + (4)^2} = \sqrt{25} \quad \text{Step 2}$$

$$|AD|^2 + |BD|^2 = 5 + 20 = 25 = |AB|^2 \quad \text{Step 3}$$

$\Rightarrow \triangle ADB$ is right angled by Pythagoras' Theorem, with $AD \perp DB$

$\therefore AD \perp BC$

Blunders (-3)

- B1 Correct answer without work shown (✍)
B2 Incorrect relevant formula
B3 Switches both x and y in substitution
B4 Incorrect squaring
B5 No conclusion or incorrect conclusion for product - i.e. $\neq -1$

Slips (-1)

- S1 Arithmetic slips to a maximum of (-3)
- S2 One sign incorrect having filled into formula correctly
- S3 One incorrect substitution for x or y

Attempts (3 marks)

- A1 Indication that the product of the slopes of perpendicular lines is -1
- A2 Correct formula with some substitution
- A3 Graphical solution or attempt at graphical solution

Worthless (0)

- W1 Incorrect formula with or without substitution

(c) (ii)

5 marks

Att 2

$$\begin{aligned} |BC| &= \sqrt{(x_2 - x_1)^2 + (y_2 - y_1)^2} \\ &= \sqrt{(4 - (-2))^2 + (-2 - 1)^2} \\ &= \sqrt{36 + 9} \\ &= \sqrt{45} \text{ or } 3\sqrt{5} \text{ or } 6.71 \text{ or } 6.7 \end{aligned}$$

Blunders (-3)

- B1 Correct answer without work shown (~~✗~~)
- B2 Incorrect relevant formula
- B3 Switches both x and y in substitution
- B4 Incorrect squaring
- B5 Answer not simplified
- B6 Early rounding which affects the accuracy of the answer

Slips (-1)

- S1 Arithmetic slips to a maximum of (-3)
- S2 One incorrect substitution for x or y

Attempts (2 marks)

- A1 Correct formula with some substitution
- A2 Attempt at difference of x values and or/ difference of y values

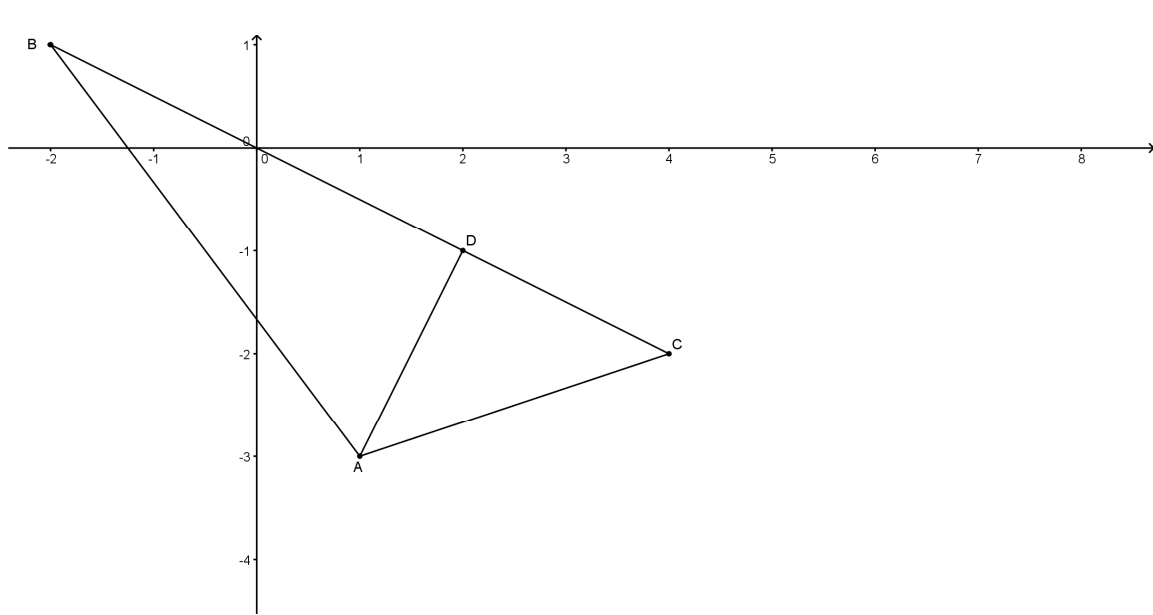
Worthless (0)

- W1 Incorrect formula with or without substitution

(c) (iii)

5 marks

Att 2



$$\text{Area triangle } ABC = \frac{1}{2} |BC| \times |AD|$$

$$= \frac{1}{2} \sqrt{45} \times \sqrt{5}$$

$$= \frac{1}{2} \sqrt{225} \text{ or } \frac{15}{2} \text{ or } 7.5 \text{ units}^2$$

$$\text{Area triangle } ABC = \frac{1}{2} |BC| \times |AD|$$

$$= \frac{1}{2} (6 \cdot 71)(2 \cdot 24)$$

$$= \frac{15 \cdot 034}{2} \text{ or } 7 \cdot 5152$$

* Accept candidates answer from part (ii)

Blunders (-3)

- B1 Correct answer without work shown (✓)
- B2 Incorrect relevant formula
- B3 Answer not simplified
- B4 Incorrect square root
- B5 Early rounding which affects the accuracy of the answer

Slips (-1)

- S1 Arithmetic slips to a maximum of (-3)

Misreadings (-1)

- M1 $\sqrt{5}$ misread as 5 or $\sqrt{45}$ misread as 45, but not both

Attempts (2 marks)


- A1 Attempt at a graphical solution
- A2 Correct area formula with some substitution

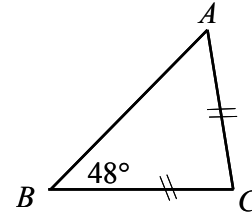
QUESTION 3

| | | |
|----------|------------------|-----------|
| Part (a) | 15 marks | Att 5 |
| Part (b) | 25(15, 10) marks | Att(5, 3) |
| Part (c) | 10(5, 5) marks | Att(2, 2) |

Part (a) 15 marks Att 5

The triangle ABC shown in the diagram is isosceles, with $|AC| = |BC|$ and $|\angle ABC| = 48^\circ$.

 Find $|\angle ACB|$.




(a) 15 marks Att 5

$$\begin{aligned} |AC| &= |BC| \Rightarrow |\angle ABC| = |\angle BAC| \\ \therefore |\angle ACB| &= 180^\circ - 2(48^\circ) \\ &= 84^\circ \end{aligned}$$

* Accept work on diagram

Blunders (-3)

- B1 Correct answer without work shown ()
- B2 Sum of angles in a triangle $\neq 180^\circ$
- B3 $|\angle BAC| \neq 48^\circ$

Slips (-1)

- S1 Arithmetic slips to a maximum of (-3)

Attempts (5 marks)

- A1 Diagram from examination paper drawn with equal angles indicated
- A2 $|\angle ABC| = |\angle BAC|$ stated
- A3 Indication that angles opposite equal sides are equal in measure
- A4 Indication that the sum of the angles in a triangle = 180°

Worthless (0)

- W1 Diagram from examination paper either partially or fully drawn
- W2 $|\angle ACB| = 48^\circ$

Part (b)

25(15, 10) marks

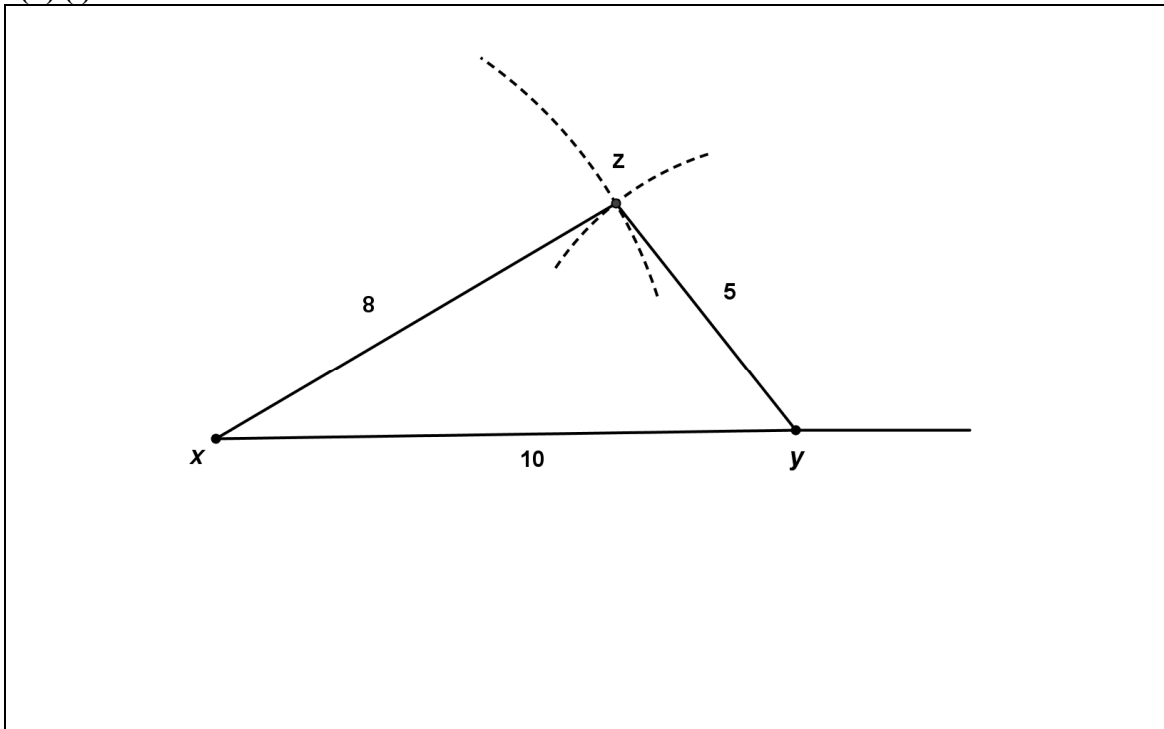
Att(5, 3)

- (i) ✎ Show how to construct the triangle XYZ , with sides $|XY| = 10$ cm, $|XZ| = 8$ cm and $|YZ| = 5$ cm.
- (ii) ✎ Prove that an exterior angle of a triangle equals the sum of the two interior opposite angles in measure.

(b) (i)

15 marks

Att 5



* Accept construction with tolerance of 2 mm

Blunders (-3)

- B1 Each incorrect side
- B2 Correct triangle but no construction lines
- B3 Construction of a right angle between sides

Attempts (5 marks)

- A1 No triangle but one correct length drawn
- A2 One correct length drawn
- A3 Rough diagram drawn with vertices and/or lengths indicated

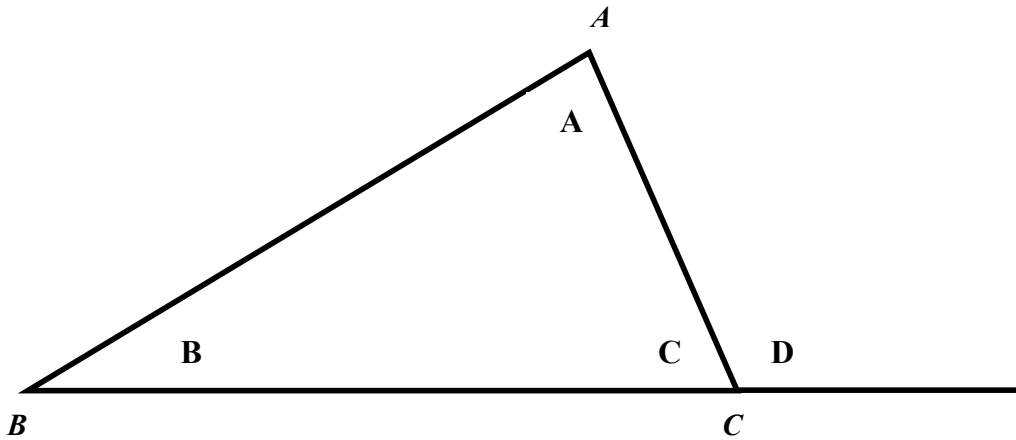
Worthless (0)

- W1 Triangle drawn with no correct length

(b) (ii)

10 marks

Att 3



Given: A triangle ABC , containing angles A , B and C , with the side $[BC]$ extended, giving the exterior angle D .

To Prove: $|\angle D| = |\angle A| + |\angle B|$ Step 1

Proof:

$$|\angle C| + |\angle D| = 180^\circ \text{ (straight angle)}$$

$$|\angle C| + |\angle A| + |\angle B| = 180^\circ \text{ (angles in a triangle add to } 180^\circ) \quad \text{Step 2}$$

$$\therefore |\angle C| + |\angle D| = |\angle C| + |\angle A| + |\angle B| \quad \text{Step 3}$$

$$\therefore |\angle D| = |\angle A| + |\angle B|$$

* Some steps may be partially indicated on diagram

Blunders (-3)

B1 Each step incorrect or omitted

B2 Each step incomplete

Attempts (3 marks)

A1 Triangle with exterior angle drawn

A2 Indication that the sum of the angles in a triangle = 180°

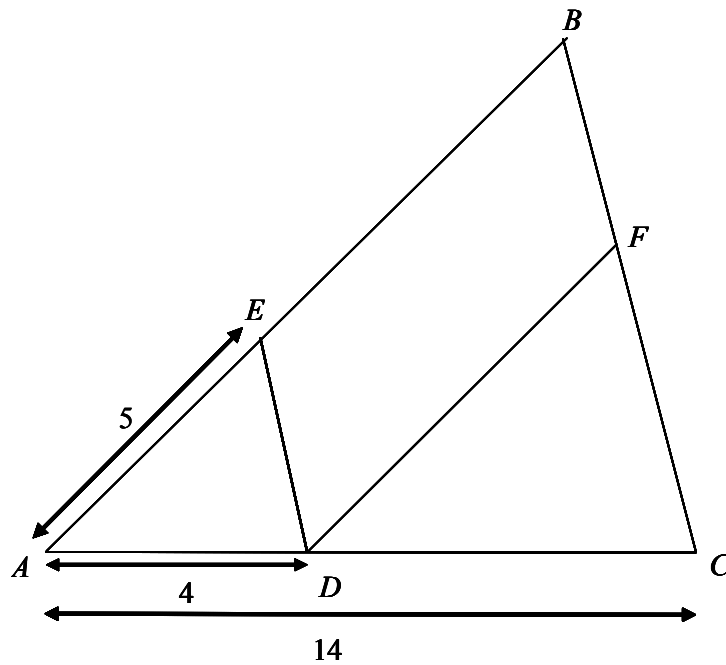
A3 Triangle drawn with vertices or angles indicated

Worthless (0)

W1 Unlabelled triangle drawn

W2 No diagram or no valid diagram

W3 Wrong theorem



In the triangle ABC , $[DE]$ is parallel to $[CB]$, $|AD| = 4$ cm, $|AC| = 14$ cm and $|AE| = 5$ cm.

(i) ✎ Find $|EB|$.

$[DF]$ is parallel to $[AB]$.

(ii) ✎ Find $\frac{\text{area } \Delta ADE}{\text{area } \Delta DCF}$ as a fraction in its simplest form.

[Hint: area of $\Delta = \frac{1}{2} ab \sin C$].

(c) (i)

5 marks

Att 2

$$\begin{aligned} \frac{|AE|}{|AB|} &= \frac{|AD|}{|AC|} & \frac{|AE|}{|EB|} &= \frac{|AD|}{|DC|} & \frac{|AC|}{|AD|} &= \frac{14}{4} = 3.5 \\ \Rightarrow \frac{5}{|AB|} &= \frac{4}{14} & \Rightarrow \frac{5}{|EB|} &= \frac{4}{10} & \Rightarrow |AB| &= 5 \times 3.5 \\ & \text{or} & & \text{or} & &= 17.5 \\ \Rightarrow |AB| &= \frac{70}{4} = 17.5 & \Rightarrow |EB| &= \frac{50}{4} = 12.5 & \Rightarrow |EB| &= 17.5 - 5 \\ \Rightarrow |EB| &= 17.5 - 5 = 12.5 & & & &= 12.5 \end{aligned}$$

Blunders (-3)

B1 Correct answer without work shown (✍)

B2 Error in transposition

B3 $\frac{|AE|}{|EB|} = \frac{|AD|}{|AC|}$ or similar incorrect ratio

Slips (-1)

S1 Arithmetic slips to a maximum of (-3)

S2 $|AB|$ found but not $|EB|$

Attempts (2 marks)

A1 Indication of equiangular triangles

A2 Indication of corresponding angles

A3 One correct relevant ratio

A4 Any use of 4 or 10 in a ratio

A5 10 written down without work or on diagram

Worthless (0)

W1 Diagram from examination paper either partially or fully drawn

W2 $\triangle AED$ treated as right-angled

(c) (ii)

5 marks

Att 2

$[DE]$ is parallel to $[CB]$ and $[DF]$ is parallel to $[AB]$

$\Rightarrow DEBF$ is a parallelogram

$$\Rightarrow |DF| = |EB| = 12.5 \quad \text{or} \quad \frac{|AB|}{|DF|} = \frac{|AC|}{|DC|} \Rightarrow \frac{17.5}{|DF|} = \frac{14}{10} \\ \Rightarrow |DF| = 12.5$$

Also, $|\angle EAD| = |\angle FDC|$ ($|\angle ADE| = |\angle DCF|$ and $|\angle AED| = |\angle DFC|$)

$$\text{area}\triangle ADE = \frac{1}{2} |AE| \cdot |AD| \sin \angle EAD$$

$$= \frac{1}{2} (5)(4) \sin \angle EAD$$

$$\text{area}\triangle DCF = \frac{1}{2} |DF| \cdot |DC| \sin \angle FDC$$

$$= \frac{1}{2} (12.5)(10) \sin \angle FDC$$

$$\Rightarrow \frac{\text{area}\triangle ADE}{\text{area}\triangle DCF} = \frac{\frac{1}{2} (5)(4) \sin \angle EAD}{\frac{1}{2} (12.5)(10) \sin \angle FDC}$$

$$= \frac{4}{25}$$

or

$$\text{area } \triangle ADE = \frac{1}{2} |AD| \cdot |DE| \sin \angle ADE$$

$$= \frac{1}{2} (4) |DE| \sin \angle ADE$$

$$= 2 |DE| \sin \angle ADE$$

$$\text{area } \triangle DCF = \frac{1}{2} |DC| \cdot |FC| \sin \angle DCF$$

$$= \frac{1}{2} (10) |FC| \sin \angle DCF$$

$$= 5 |FC| \sin \angle DCF$$

$$|ED| : |BC| = 4 : 14 = 2 : 7$$

$$|ED| = |BF| \Rightarrow |ED| : |FC| = 2 : 5$$

$$|\angle ADE| = |\angle DCF|$$

$$\therefore \frac{\text{area } \triangle ADE}{\text{area } \triangle DCF} = \frac{2 |DE| \sin \angle ADE}{5 |FC| \sin \angle DCF}$$

$$= \frac{2}{5} \cdot \frac{2}{5}$$

$$= \frac{4}{25}$$

Blunders (-3)

- B1 Correct answer without work shown (✍)
- B2 Incorrect relevant formula
- B3 Ratio not indicated
- B4 Ratio not simplified
- B5 Error in transposition
- B6 Incorrect substitution into correct formula
- B7 Incorrect ratio
- B8 Angle not specified, once only

Slips (-1)

- S1 Arithmetic slips to a maximum of (-3)
- S2 Fraction not in simplest form

Attempts (2 marks)

- A1 Correct formula with some substitution
- A2 Indication of equiangular triangles
- A3 One correct relevant ratio

Worthless (0)

- W1 Diagram from examination paper either partially or fully drawn

QUESTION 4

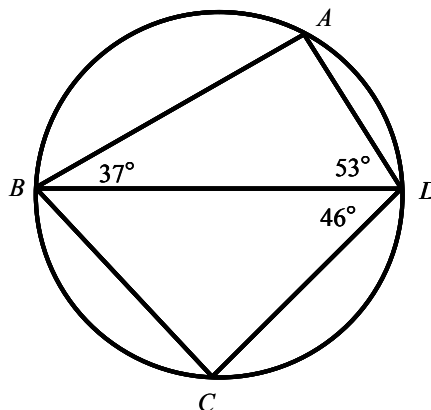
| | | |
|-----------------|---------------------------|---------------------|
| Part (a) | 10(5, 5) marks | Att(2, 2) |
| Part (b) | 20 marks | Att 7 |
| Part (c) | 20(5, 5, 10) marks | Att(2, 2, 3) |

Part (a) **10(5, 5) marks** **Att(2, 2)**

A, B, C and D are points on the circle as shown

$$|\angle ABD| = 37^\circ \text{ and } |\angle ADB| = 53^\circ.$$

- (i) ✎ Explain why $[BD]$ is a diameter of the circle.
- (ii) ✎ Given that $|\angle BDC| = 46^\circ$, find $|\angle CBD|$.



(a) (i) **5 marks** **Att 2**

$$|\angle BAD| = 180^\circ - (37^\circ + 53^\circ) = 90^\circ$$

$\therefore [BD]$ is a diameter since the angle in a semi-circle is a right angle
or the angle at the circumference standing on a diameter is 90° .

* $|\angle BAD| = 90^\circ$ and no reason given gets 4 marks

Blunders (-3)

- B1 Correct answer without work shown (✎)
- B2 Sum of angles in a triangle $\neq 180^\circ$

Slips (-1)

- S1 Arithmetic slips to a maximum of (-3)

Attempts (2 marks)

- A1 Indication that the sum of the angles in a triangle = 180°
- A2 Mention of angle in a semi-circle
- A3 Mention of angle standing on a diameter

Worthless (0)

- W1 Diagram from examination paper either partially or fully drawn

(a) (ii)

5 marks

Att 2

$$|\angle BCD| = 90^\circ \text{ (angle standing on a diameter)}$$

$$\therefore |\angle CBD| = 90^\circ - 46^\circ$$

$$= 44^\circ$$

or

$$|\angle ABC| + |\angle ADC| = 180^\circ$$

$$\Rightarrow |\angle ABD| + |\angle CBD| + |\angle ADB| + |\angle CBD| = 180^\circ$$

$$\Rightarrow 37^\circ + |\angle CBD| + 53^\circ + 46^\circ = 180^\circ$$

$$\therefore |\angle CBD| = 180^\circ - 136^\circ$$

$$= 44^\circ$$

Blunders (-3)

- B1 Correct answer without work shown (✍)
- B2 Sum of angles in a triangle $\neq 180^\circ$
- B3 Sum of opposite angles in a cyclic quadrilateral $\neq 180^\circ$

Slips (-1)

- S1 Arithmetic slips to a maximum of (-3)

Attempts (2 marks)

- A1 Indication that the sum of the angles in a triangle = 180°
- A2 $|\angle BCD| = 90^\circ$ or indication on diagram
- A3 Mention of angle in a semi-circle
- A4 Mention of angle standing on a diameter
- A5 $|\angle CBD| = 62^\circ$


Worthless (0)

- W1 Diagram from examination paper either partially or fully drawn

Part (b)

20 marks

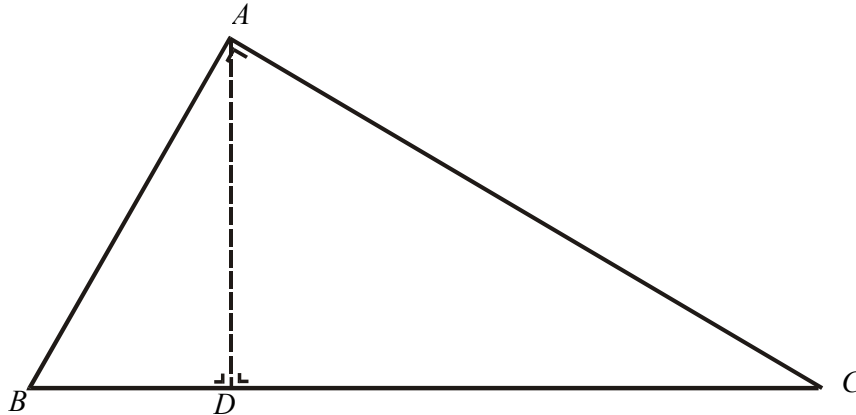
Att 7

 Prove that in a right-angled triangle, the square of the length of the side opposite to the right angle is equal to the sum of the squares of the lengths of the other two sides.

(b)

20 marks

Att 7



Given: $\triangle ABC$ with $|\angle BAC| = 90^\circ$

To Prove: $|BC|^2 = |AB|^2 + |AC|^2$ Step 1

Construction: Draw $AD \perp BC$ Step 2

Proof

Consider $\triangle ABC$ and $\triangle ABD$

$|\angle BAC| = |\angle BDA|$ (both right angles)

$|\angle ABC| = |\angle ABD|$ (common angle)

$|\angle BCA| = |\angle BAD|$ (sum of angles in a triangle = 180°)

$\therefore \triangle ABC$ and $\triangle ABD$ are equiangular (similar) Step 3

$\Rightarrow \frac{|AB|}{|BC|} = \frac{|BD|}{|AB|}$

$\Rightarrow |AB|^2 = |BC| \cdot |BD|$ Step 4

Similarly, considering $\triangle ABC$ and $\triangle ADC$

$\Rightarrow |AC|^2 = |BC| \cdot |DC|$

$\therefore |AB|^2 + |AC|^2 = |BC| \cdot |BD| + |BC| \cdot |DC|$ Step 5

$= |BC|(|BD| + |DC|)$

$= |BC| \cdot |BC|$ or $|BC|^2$ Step 6

* Some steps may be partially indicated on diagram

Blunders (-3)

- B1 Each step incorrect or incomplete
- B2 Each step omitted

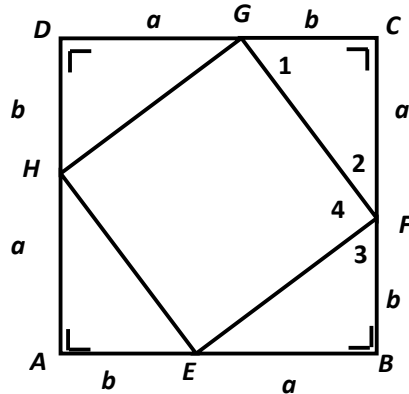
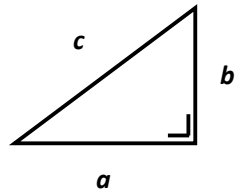
Attempts (7 marks)

- A1 Labelled right angled triangle
- A2 Right angled triangle with perpendicular indicated

Worthless (0)

- W1 No diagram or no valid diagram
- W2 Wrong theorem

Alternative Proof



Given: Right angled triangle with lengths of sides a, b, c , where c is the hypotenuse.

To Prove: $a^2 + b^2 = c^2$ Step 1

Construction: Construct a square $ABCD$ of side $a + b$.
 Construct the point E on $[AB]$ such that $|AE| = b$ (and hence $|EB| = a$).
 Similarly, construct the points F on $[BC]$, G on $[CD]$ and H on $[AD]$.
 Join E, F, G and H to divide the square $ABCD$ into a quadrilateral and four triangles. Label angles 1, 2, 3 and 4. Step 2

Proof: Each of the four inscribed triangles is congruent to the original triangle (S.A.S)
 \therefore Each side of the inner quadrilateral has length c Step 3

$$|\angle 1| + |\angle 2| = 90^\circ \text{ (Sum of angles in a triangle} = 180^\circ)$$

$$|\angle 1| = |\angle 3| \text{ (Corresponding angles in congruent triangles)}$$

$$\therefore |\angle 2| + |\angle 3| = 90^\circ$$

$$\therefore |\angle 4| = 90^\circ \text{ (Straight angle)} \quad \text{Step 4}$$

\therefore The inscribed quadrilateral is a square.

Area of square $ABCD = 4(\text{area of one triangle}) + \text{area of inscribed square}$

$$\Rightarrow (a + b)^2 = 4\left(\frac{1}{2}ab\right) + c^2 \quad \text{Step 5}$$

$$\Rightarrow a^2 + 2ab + b^2 = 2ab + c^2 \quad \text{Step 6}$$

$$\therefore a^2 + b^2 = c^2$$

* Some steps may be indicated partially on diagram

Blunders (-3)

B1 Each step incorrect or incomplete

B2 Each step omitted

Attempts (7 marks)

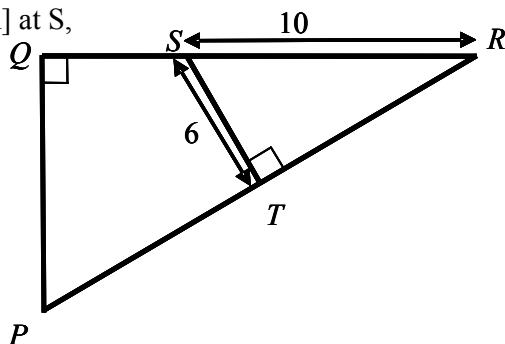
A1 Labelled right angled triangle drawn

Worthless (0)

W1 No diagram or no valid diagram

W2 Wrong theorem

PQR is a right angled triangle.
 T is the midpoint of [PR].
 A line is drawn from T to meet [QR] at S,
 such that $|\angle RTS|$ is a right angle.
 $|ST| = 6$ and $|SR| = 10$.



- (i) ✎ Find $|RT|$.
 (ii) ✎ Prove that $|\angle QPR| = |\angle TSR|$.
 (iii) ✎ Find $|PQ|$.

(c) (i)

5 marks

Att 2

$$\begin{aligned} |RS|^2 &= |RT|^2 + |ST|^2 \\ \Rightarrow 10^2 &= |RT|^2 + 6^2 \\ \Rightarrow |RT|^2 &= 100 - 36 = 64 \\ \Rightarrow |RT| &= \sqrt{64} \text{ or } 8 \end{aligned}$$

Blunders (-3)

- B1 Correct answer without work shown (✎)
 B2 Error in Pythagoras' Theorem
 B3 Error in transposition
 B4 Incorrect squaring
 B5 Incorrect square root

Slips (-1)

- S1 Arithmetic slips to a maximum of (-3)

Attempts (2 marks)

- A1 Indication of Pythagoras' Theorem

Worthless (0)

- W1 Diagram from examination paper either partially or fully drawn

(c) (ii)

5 marks

Att 2

Consider $\triangle PQR$ and $\triangle STR$

$$|\angle PQR| = |\angle STR| \quad (90^\circ)$$

$$|\angle PRQ| = |\angle SRT| \quad (\text{common angle})$$

$$\therefore |\angle QPR| = |\angle TSR| \quad (\text{sum of angles in a triangle} = 180^\circ)$$

or

$$\cos \angle TSR = \frac{6}{10} \Rightarrow |\angle TSR| = \cos^{-1} 0.6 = 53.13^\circ$$

$$\Rightarrow |\angle SRT| = 90^\circ - 53.13^\circ = 36.87^\circ$$

$$\begin{aligned} \text{In } \triangle PQR, |\angle QPR| &= |\angle PQR| - |\angle PRQ| \\ &= 90^\circ - 36.87^\circ = 53.13^\circ \end{aligned}$$

$$\therefore |\angle QPR| = |\angle TSR|$$

* Some steps may be indicated on diagram

Blunders (-3)

- B1 Calculator in incorrect mode
- B2 Incorrect ratio for cos function
- B3 Incorrect use of calculator

Attempts (2 marks)

- A1 Diagram drawn with equal angles indicated
- A2 Indication that the sum of the angles in a triangle = 180°
- A3 Relevant triangles redrawn
- A4 Correct trigonometric ratio with some substitution

Worthless (0)

- W1 Diagram from examination paper either partially or fully drawn

(c) (iii)

10 marks

Att 3

$\triangle PQR$ and $\triangle STR$ are equiangular

$$\Rightarrow \frac{|PQ|}{|ST|} = \frac{|PR|}{|SR|}$$

$$\Rightarrow \frac{|PQ|}{6} = \frac{2(8)}{10}$$

$$\Rightarrow |PQ| = 9.6$$

or

$$\text{In } \triangle PQR, \sin \angle PRQ = \frac{|PQ|}{|PR|} = \frac{|PQ|}{2(8)} = \frac{|PQ|}{16}$$

$$\text{In } \triangle RST, \sin \angle SRT = \frac{|ST|}{|SR|} = \frac{6}{10}$$

$$\angle PRQ = \angle SRT \Rightarrow \frac{|PQ|}{16} = \frac{6}{10}$$

$$\Rightarrow |PQ| = \frac{96}{10} = 9.6$$

or

$$\text{In } \triangle RST, \sin \angle SRT = \frac{6}{10} \Rightarrow |\angle SRT| = \sin^{-1} 0.6 = 36.87^\circ$$

$$\text{In } \triangle PQR, \sin 36.87^\circ = \frac{|QP|}{16} \Rightarrow |QP| = 16 \sin 36.87^\circ = 9.6$$

* Some steps may be indicated on diagram

Blunders (-3)

- B1 Correct answer without work shown (✍)
- B2 Incorrect ratio
- B3 Error in transposition
- B4 Incorrect ratio for sin function
- B5 Calculator in incorrect mode
- B6 Early rounding which affects the accuracy of the answer
- B7 $|PR| \neq 16$
- B8 Incorrect use of calculator

Slips (-1)

- S1 Arithmetic slips to a maximum of (-3)

Attempts (3 marks)

- A1 Indication that the lengths of corresponding sides in equiangular triangles are proportional
- A2 Correct trigonometric ratio with some substitution
- A3 One correct relevant ratio
- A4 $|PT| = 8$ or $|PR| = 16$
- A5 $|PQ|^2 + |QR|^2 = |PR|^2$ or equivalent


Worthless (0)

- W1 Diagram from examination paper either partially or fully drawn

QUESTION 5

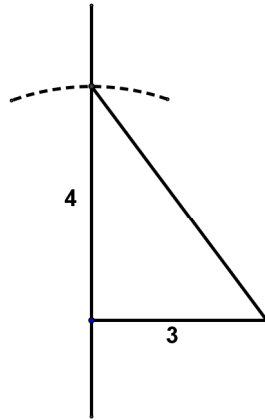
| | | |
|----------|------------------|-----------|
| Part (a) | 10 marks | Att 3 |
| Part (b) | 20(10, 10) marks | Att(3, 3) |
| Part (c) | 20(10, 10) marks | Att(3, 3) |

Part (a) 10 marks Att 3

 Without using a calculator construct the angle A such that
 $6 \tan A = 8, \quad 0^\circ \leq A < 90^\circ.$

(a) 10 marks Att 3

$$6 \tan A = 8 \Rightarrow \tan A = \frac{8}{6} = \frac{4}{3}$$



- * Accept construction with tolerance of 2 mm
- * Measure sides to check ratio
- * Measure for right angle – accept a tolerance of 2°

Blunders (-3)

- B1 Angle A not indicated
- B2 Incorrect use of ratio
- B3 Incorrect side
- B4 Error in transposition

Attempts (3 marks)

- A1 One side of length 6 or 8 drawn (or equivalent)
- A2 Indication of 8 as “opposite” and/or 6 as “adjacent” (or equivalent)
- A3 Indication of hypotenuse = 10 - i.e. use of Pythagoras’ Theorem (or equivalent)
- A4 Rough right angled triangle drawn
- A5 Angle of 53° constructed
- A6 $\tan A = \frac{8}{6}$ or equivalent
- A7 Non-right angled triangle drawn with lengths indicated and A opposite side 8
- A8 Effort at isolating $\tan A$

Worthless (0)

- W1 Non-right angled triangle drawn

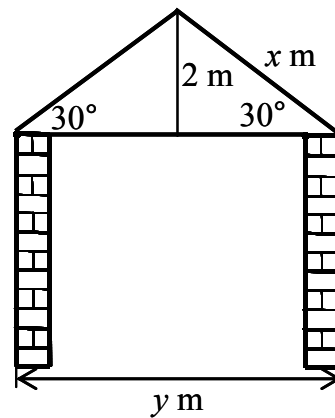
Part (b)

20(10,10) marks

Att(3, 3)

A builder wants to construct a roof with pitch of 30° . The height of the apex above the ceiling level is 2 m, as shown in the diagram.

- (i) ✎ Calculate x , the length of the rafter.
- (ii) ✎ Calculate y , the length of the ceiling joist, correct to two decimal places.



(b) (i)

10 marks

Att 3

$$\sin 30^\circ = \frac{2}{x}$$

$$\Rightarrow x \sin 30^\circ = 2$$

$$\Rightarrow x = \frac{2}{\sin 30^\circ}$$

$$= \frac{2}{\frac{1}{2}}$$

$$= 4$$

or

$$\cos 60^\circ = \frac{2}{x}$$

$$\Rightarrow x \cos 60^\circ = 2$$

$$\Rightarrow x = \frac{2}{\cos 60^\circ}$$

$$= \frac{2}{\frac{1}{2}}$$

$$= 4$$

or

$$\frac{x}{\sin 90^\circ} = \frac{2}{\sin 30^\circ}$$

$$\Rightarrow x = \frac{2 \sin 90^\circ}{\sin 30^\circ}$$

$$= \frac{2(1)}{\frac{1}{2}}$$

$$= 4$$

Blunders (-3)

- B1 Correct answer without work shown (✍)
- B2 Incorrect ratio for sin/cos function
- B3 Error in transposition
- B4 Calculator in incorrect mode
- B5 Incorrect ratio for Sine Rule

Slips (-1)

- S1 Arithmetic slips to a maximum of (-3)

Attempts (3 marks)

- A1 $\sin 30^\circ$
- A2 $\frac{2}{x}$
- A3 Sine Rule with some substitution
- A4 Mention of 60°

Worthless (0)

- W1 $\frac{x}{90} = \frac{2}{30}$
- W2 Diagram from examination paper either partially or fully drawn

(b) (ii)

10 marks

Att 3

$$4^2 = 2^2 + z^2, z = \frac{y}{2}$$

$$16 = 4 + z^2$$

$$z^2 = 12$$

$$z = \sqrt{12}$$

$$= 3.464$$

$$y = 2(3.464)$$

$$= 6.9282$$

$$= 6.93$$

or

$$4^2 = 2^2 + \left(\frac{y}{2}\right)^2$$

$$16 = 4 + \frac{y^2}{4}$$

$$64 = 16 + y^2$$

$$y^2 = 48$$

$$y = 6.928$$

$$y = 6.93 \text{ m}$$

or

$$\cos 30^\circ = \frac{z}{4}, z = \frac{y}{2}$$

$$\Rightarrow z = 4 \cos 30^\circ$$

$$= 3.464$$

$$\Rightarrow y = 2(3.464)$$

$$= 6.928$$

$$= 6.93 \text{ m}$$

$$\sin 60^\circ = \frac{z}{4}, z = \frac{y}{2}$$

$$\Rightarrow z = 4 \sin 60^\circ$$

$$= 3.464$$

$$\Rightarrow y = 2(3.464)$$

$$= 6.928$$

$$= 6.93 \text{ m}$$

or

or

$$\tan 30^\circ = \frac{2}{z}, z = \frac{y}{2}$$

$$\Rightarrow z \tan 30^\circ = 2$$

$$\Rightarrow z = \frac{2}{\tan 30^\circ}$$

$$= 3.464$$

$$\Rightarrow y = 2(3.464)$$

$$= 6.928$$

$$= 6.93 \text{ m}$$

$$\tan 60^\circ = \frac{z}{2}, z = \frac{y}{2}$$

$$\Rightarrow z = 2 \tan 60^\circ$$

$$= 3.464$$

$$\Rightarrow y = 2(3.464)$$

$$= 6.928$$

$$= 6.93 \text{ m}$$

or

or

$$\frac{y}{\sin 120^\circ} = \frac{4}{\sin 30^\circ}$$

$$\Rightarrow y = \frac{4 \sin 120^\circ}{\sin 30^\circ}$$

$$= 6.928$$

$$= 6.93$$

* Accept candidate's answer from (b) (i)

Blunders (-3)

- B1 Correct answer without work shown (✍)
- B2 Error in Pythagoras' Theorem
- B3 Incorrect squaring
- B4 Error in transposition
- B5 Error in square root
- B6 Incorrect ratio for sin/cos/tan function
- B7 Incorrect ratio for Sine Rule
- B8 Calculator in incorrect mode
- B9 Early rounding which affects the accuracy of the answer

Slips (-1)

- S1 Arithmetic slips to a maximum of (-3)
- S2 Answer not rounded off or incorrectly rounded
- S3 Failure to multiply by 2

Attempts (3 marks)

- A1 Effort at Pythagoras' Theorem
- A2 Mention of $\frac{y}{2}$ or half the length of the ceiling joist
- A3 Sine Rule with some substitution
- A4 Evaluation of sin/cos/tan of relevant angle
- A5 Mention of 60° or 120°

Worthless (0)

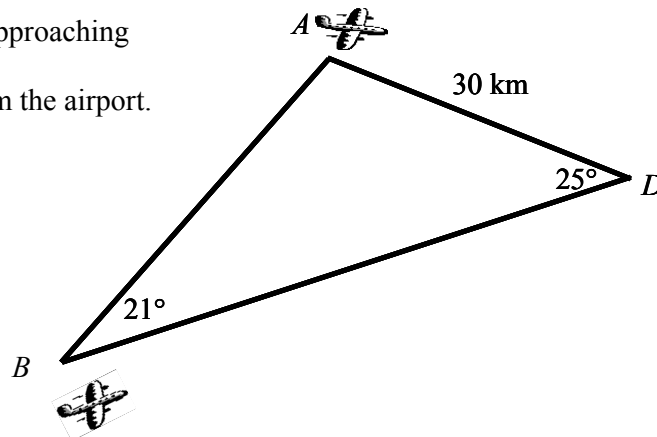
- W1 Diagram from examination paper either partially or fully drawn

Part (c)

20(10,10) marks

Att(3, 3)

Two planes, A and B , are approaching
Dublin airport (D).
Plane A is 30 km from the airport.
 $|\angle ABD| = 21^\circ$ and
 $|\angle ADB| = 25^\circ$.



- (i) ✍ Find the distance plane B is from the airport, giving your answer correct to the nearest km.

Both planes travel at an average speed of 400 km/h on their approach to the airport.

- (ii) ✍ Calculate the time interval, in minutes, between the two planes landing.

(c) (i)

10 marks

Att 3

$$|\angle BAD| = 180^\circ - (21^\circ + 25^\circ) = 134^\circ$$

$$\frac{|BD|}{\sin 134^\circ} = \frac{30}{\sin 21^\circ}$$

$$\begin{aligned}\Rightarrow |BD| &= \frac{30 \sin 134^\circ}{\sin 21^\circ} = \frac{21 \cdot 5801}{0 \cdot 3584} \\ &= 60 \cdot 2 \\ &= 60 \text{ km}\end{aligned}$$

Blunders (-3)

- B1 Correct answer without work shown (✍)
- B2 Incorrect ratio for Sine Rule
- B3 Error in transposition
- B4 Calculator in incorrect mode
- B5 Early rounding which affects the accuracy of the answer
- B6 Sum of the angles in a triangle $\neq 180^\circ$

Slips (-1)

- S1 Arithmetic slips to a maximum of (-3)
- S2 Answer not rounded off or incorrect rounding

Misreadings (-1)

- M1 $|AB|$ found

Attempts (3 marks)

- A1 Sine Rule with some substitution
- A2 Mention of 134°
- A3 Indication that the sum of the angles in a triangle = 180°

Worthless (0)

W1 $\frac{|BD|}{134} = \frac{30}{21}$

- W2 Triangle treated as right angled

(c) (ii)

10 marks

Att 3

$$A : \text{time} = \frac{\text{distance}}{\text{speed}} = \frac{30}{400} \text{ or } \frac{3}{40} \text{ hr or } 0.075 \text{ hr} \quad \text{Step 1}$$

$$B : \text{time} = \frac{\text{distance}}{\text{speed}} = \frac{60}{400} \text{ or } \frac{3}{20} \text{ hr or } 0.15 \text{ hr} \quad \text{Step 2}$$

$$\begin{aligned} \text{Time interval} &= 0.15 - 0.075 = 0.075 \text{ hr} \\ &= 0.075 \times 60 \\ &= 4.5 \text{ min} \quad \text{Step 3} \end{aligned}$$

* Accept candidate's answer from (c) (i)

Blunders (-3)

- B1 Correct answer without work shown (✍)
- B2 Error in Distance/Speed/Time formula, once only
- B3 No conversion to minutes
- B4 Incorrect conversion to minutes

Slips (-1)

- S1 Arithmetic slips to a maximum of (-3)
- S2 Addition instead of subtraction

Attempts (3 marks)

- A1 Mention of Distance/Speed/Time formula
- A2 Mention of 60

QUESTION 6

| | | |
|----------|--------------------|--------------|
| Part (a) | 10 marks | Att 3 |
| Part (b) | 20(5, 15) marks | Att(2, 5) |
| Part (c) | 20(10, 5, 5) marks | Att(3, 2, 2) |

Part (a) 10 marks Att 3

In Galway last year, there were 4320 small cars, 3780 medium cars and 1620 large cars sold.
Illustrate this information on a pie chart.

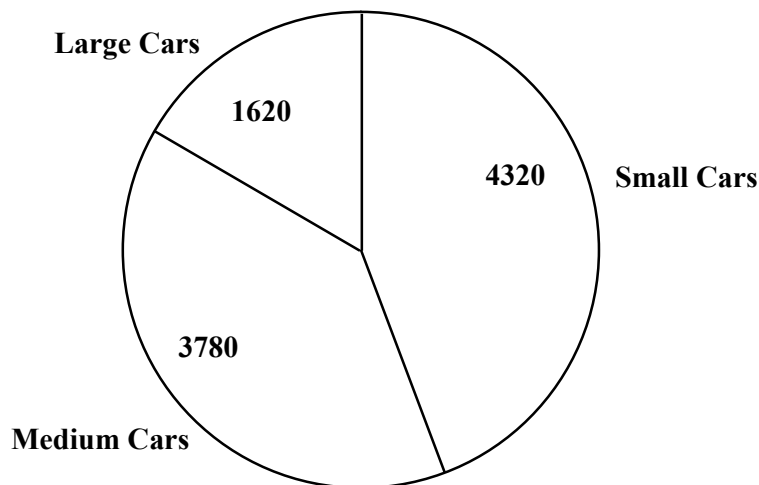
(a) 10 marks Att 3

Total number of cars = 9720

$$\text{Small cars: } \frac{360}{9720} \times 4320 = 160^\circ$$

$$\text{Medium cars: } \frac{360}{9720} \times 3780 = 140^\circ$$

$$\text{Large cars: } \frac{360}{9720} \times 1620 = 60^\circ$$



* Allow for tolerance of 5°

Blunders (-3)

- B1 Correct answer without work shown (✍)
- B2 Sum of angles $\neq 360^\circ$
- B3 Incorrect fraction
- B4 Incorrect labelling of sector or no labelling
- B5 Angle outside tolerance

Slips (-1)

- S1 Arithmetic slips to a maximum of (-3)

Attempts (3 marks)

- A1 Indication of 360°
- A2 Circle drawn
- A3 Angles correctly calculated but no pie chart drawn
- A4 Total number of cars found

Worthless (0)

- W1 Bar chart drawn

Part (b)

20(5,15) marks

Att(2, 5)

The braking distance in metres, i.e. the distance travelled from when the brake is applied to when a car stops, is recorded for 50 drivers.

The cumulative frequency table below shows the results obtained.

| | | | | | |
|----------------------|------|------|------|------|------|
| Braking distance (m) | < 10 | < 20 | < 28 | < 34 | < 40 |
| Number of Drivers | 2 | 30 | 40 | 46 | 50 |

(i) Copy and complete the following frequency table.

| | | | | | |
|----------------------|--------|---------|---------|---------|---------|
| Braking distance (m) | 0 – 10 | 10 – 20 | 20 – 28 | 28 – 34 | 34 – 40 |
| Number of Drivers | | | | | |

[Note: 10 – 20 means 10 or more but less than 20, etc.]

(ii) ✍ Taking mid-interval values, calculate the mean breaking distance, giving your answer correct to the nearest metre.

(b) (i)

5 marks

Att 2

| | | | | | |
|----------------------|--------|---------|---------|---------|---------|
| Braking distance (m) | 0 – 10 | 10 – 20 | 20 – 28 | 28 – 34 | 34 – 40 |
| Number of Drivers | 2 | 28 | 10 | 6 | 4 |

Blunders (-3)

B1 Omission of a value

Slips (-1)

S1 Arithmetic slips to a maximum of (-3)

Attempts (2 marks)

A1 Any one value correctly filled into table

A2 Indication of subtraction of frequencies

A3 Addition of frequencies

Worthless (0)

W1 Table copied from examination paper

W2 Cumulative frequency curve drawn

(b) (ii)

15 marks

Att 5

The mid-interval values are: 5, 15, 24, 31, 37

$$\begin{aligned}\text{Mean} &= \frac{(2)(5) + (28)(15) + (10)(24) + (6)(31) + (4)(37)}{2 + 28 + 10 + 6 + 4} \\ &= \frac{10 + 420 + 240 + 186 + 148}{50} \\ &= \frac{1004}{50} \text{ or } 20.08 \\ &= 20\end{aligned}$$

* Accept candidate's answer from (b) (i)

Blunders (-3)

- B1 Correct answer without work shown (✍)
- B2 Consistent incorrect mid-interval values
- B3 Division by 5
- B4 Division by sum of mid-interval values
- B5 Mid-interval values added to frequencies instead of multiplied

Slips (-1)

- S1 Arithmetic slips to a maximum of (-3)
- S2 Answer not rounded or incorrectly rounded

Attempts (5 marks)

- A1 Step towards mid-interval values
- A2 One correct multiplication in numerator
- A3 Indication of division by 50

Worthless (0)

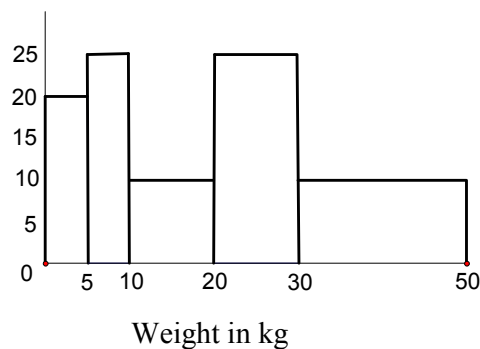
- W1 Sum of frequencies divided by 5

Part (c)

20(10, 5, 5) marks

Att(3, 2, 2)

An airline recorded the weight of each passenger's baggage on a particular flight. The results are shown in the histogram



(i) Copy and complete the following frequency table in your answer book.

| Weight in kg | 0 – 5 | 5 – 10 | 10 – 20 | 20 – 30 | 30 – 50 |
|-------------------|-------|--------|---------|---------|---------|
| No. of passengers | 20 | | | | |

[Note: 5 – 10 means 5 or more but less than 10, etc.]

- (ii) How many passengers were on the plane?
- (iii) The airline charged an excess baggage fee of €8 for every kg over 25 kg. The airline collected €2880 from passengers in the 30 – 50 kg group.
 - ✍ What was the average excess baggage fee paid per passenger in the 30 – 50 kg group?

(c) (i)

10 marks

Att 3

| | | | | | |
|-------------------|-------|--------|---------|---------|---------|
| Weight in kg | 0 – 5 | 5 – 10 | 10 – 20 | 20 – 30 | 30 – 50 |
| No. of passengers | 20 | 25 | 20 | 50 | 40 |

Blunders (-3)

- B1 Height taken as frequency
- B2 Mishandling of base
- B3 Omission of a value, each time

Slips (-1)

- S1 Arithmetic slips to a maximum of (-3)

Attempts (3 marks)

- A1 Indication of work with base

Worthless (0)

- W1 Table copied from examination paper with no further entries

(c) (ii)

5 marks

Att 2

| |
|---|
| Number of passengers = $20 + 25 + 20 + 50 + 40 = 155$ |
|---|

- * Accept candidate's answer from (c) (i)
- * Accept answer without work

Blunders (-3)

- B1 Omission of each number

Slips (-1)

- S1 Arithmetic slips to a maximum of (-3)

Attempts (2 marks)

- A1 Indication of addition of number of passengers

(c) (iii)

5 marks

Att 2

$$\begin{aligned}\text{Number of passengers in 30 – 50 kg group} &= 40 \\ \text{Average excess baggage fee per passenger} &= \text{€}2880 \div 40 \\ &= \text{€}72\end{aligned}$$

or

$$\begin{aligned}\text{Excess baggage} &= \text{€}2880 \div 8 = 360 \text{ kg} \\ \text{Average excess baggage per person} &= 360 \div 40 = 9\text{kg} \\ \text{Average excess baggage fee per passenger} &= 9 \times 8 \\ &= \text{€}72\end{aligned}$$

* Accept candidate's answer from (c) (i)

Blunders (-3)

B1 Correct answer without work shown (✍)

B2 Incorrect number of passengers

B3 Multiplication by 40

Slips (-1)

S1 Arithmetic slips to a maximum of (-3)

Attempts (2 marks)

A1 Number of passengers = 40

A2 €2880 ÷ 8

A3 €2880 ÷ 5

Worthless (0)

W1 25 × 8

BONUS MARKS FOR ANSWERING THROUGH IRISH

Bonus marks are applied separately to each paper as follows:

If the mark achieved is 225 or less, the bonus is 5% of the mark obtained, rounded *down*.
(e.g. 198 marks \times 5% = 9.9 \Rightarrow bonus = 9 marks.)

If the mark awarded is above 225, the following table applies:

| Bunmharc (Marks obtained) | Marc Bónais (Bonus Mark) | Bunmharc (Marks obtained) | Marc Bónais (Bonus Mark) |
|------------------------------|-----------------------------|------------------------------|-----------------------------|
| 226 | 11 | 261 – 266 | 5 |
| 227 – 233 | 10 | 267 – 273 | 4 |
| 234 – 240 | 9 | 274 – 280 | 3 |
| 241 – 246 | 8 | 281 – 286 | 2 |
| 247 – 253 | 7 | 287 – 293 | 1 |
| 254 – 260 | 6 | 294 – 300 | 0 |