

AN ROINN OIDEACHAIS AGUS EOLAÍOCHTA

JUNIOR CERTIFICATE EXAMINATION, 2002

MATHEMATICS - HIGHER LEVEL

MONDAY, 10 JUNE - MORNING, 9.30 to 12.00

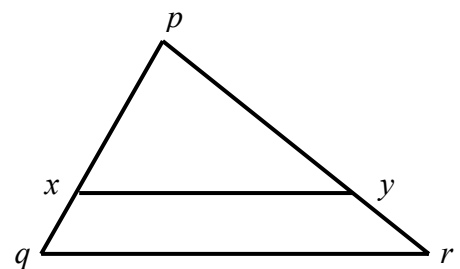
PAPER 2 (300 marks)

Attempt **QUESTION 1** (100 marks) and **FOUR** other questions (50 marks each).

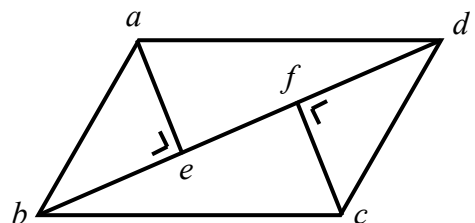
**WARNING: Marks will be lost if necessary work is not clearly shown.
Mathematics Tables may be obtained from the Superintendent.**

1. (i) Calculate $\frac{3}{7}$ of 98 and express your answer as a fraction of 56.
Give your answer in its simplest form.
- (ii) €225 is shared among three people in the ratio $1 : \frac{3}{2} : 2$. Calculate the largest share.
- (iii) The height of a cone is twice the radius. The volume of the cone is $\frac{16}{3}\pi \text{ cm}^3$.
Calculate the radius.

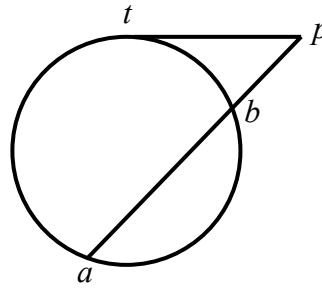
- (iv) In the triangle pqr , xy is parallel to qr .
 $|pq| = 14 \text{ cm}$, $|qr| = 21 \text{ cm}$ and $|xq| = 4 \text{ cm}$.
Find $|xy|$.



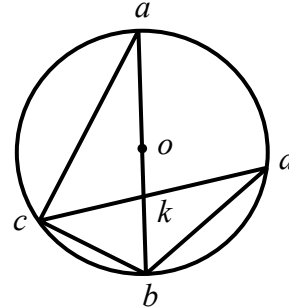
- (v) $abcd$ is a parallelogram.
 ae and cf are perpendicular to bd as shown.
Prove the triangles abe and dcf are congruent.



- (vi) pt is a tangent to the circle at t .
 $|pt| = 8$ cm and $|ab| = 12$ cm.
 Find $|pb|$.
 [Hint: Let $|pb| = x$.]



- (vii) $[ab]$ is a diameter of the circle of centre o .
 c and d are points on the circle.
 $[ab]$ and $[cd]$ intersect at k .
 $|\angle cdb| = 38^\circ$ and $|\angle ckb| = 80^\circ$.
 Write down $|\angle cab|$ and then find $|\angle dcb|$.



- (viii) The line $2x - 3y + 12 = 0$ cuts the x -axis at p and the y -axis at q .
 Find the coordinates of the midpoint of $[pq]$.

- (ix) Verify that the point $(1, -1)$ is on the line $3x + 2y - 1 = 0$.
 Find the equation of the image of this line under the translation $(1, -1) \rightarrow (-2, 3)$.

- (x) $\sqrt{3} \tan 2A = 1$ where $0^\circ \leq A \leq 90^\circ$. Find A .

2. (a) €750 was invested for three years at compound interest.

The rate of interest for each of the first two years was 4% per annum.

- (i) Calculate the amount of the investment at the end of the second year.
 (ii) At the end of the third year the amount of the investment was €851.76.
 Calculate the rate of interest for the third year.

- (b) Given that $4xp - 3t = 5p$

- (i) express x in terms of p and t
 (ii) find the value of x when $t = \frac{2p}{3}$.

3. (a) Prove that any point on the perpendicular bisector of a given line segment is equidistant from the end points of the line segment.

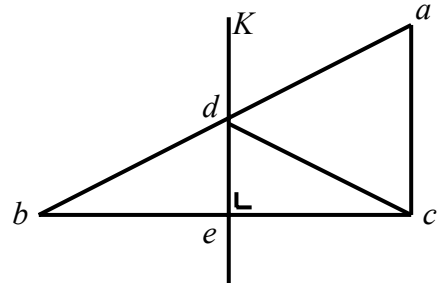
(b) In the triangle abc , $ac \perp bc$ and $|\angle abc| = 30^\circ$.

K is the perpendicular bisector of $[bc]$
and K intersects $[ab]$ at d .

(i) Find $|\angle dcb|$.

(ii) Prove $|dc| = |da| = |ac|$.

(iii) Find the ratio $\frac{\text{area } \Delta dbe}{\text{area } \Delta abc}$.



4. (a) Prove that in a right-angled triangle the area of the square on the hypotenuse is the sum of the areas of the squares on the other two sides.

(b) In the triangle xyz , $|\angle xyz| = 90^\circ$.

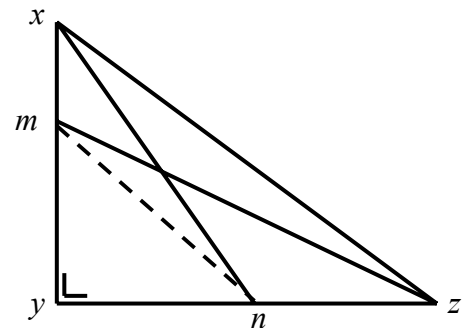
m is a point on $[xy]$ and n is a point on $[yz]$.

(i) Prove that

$$|xz|^2 - |mz|^2 = |xy|^2 - |my|^2.$$

(ii) Deduce that

$$|xz|^2 - |mz|^2 = |xn|^2 - |mn|^2.$$



5. $a(-1, 4)$, $b(3, 1)$ and $c(2, 0)$ are three points.

(i) Find $|ab|$.

(ii) Find the slope of ab .

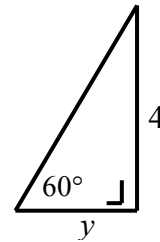
(iii) The line L passes through the point c and is perpendicular to ab .

Find the equation of L .

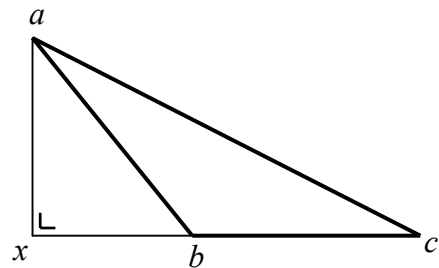
(iv) Calculate the area of the triangle abc .

(v) The line L intersects ab in d . Use the area of the triangle abc to find $|cd|$.

6. (a) In the triangle shown,
- calculate y
 - calculate the area of the triangle.
- Give both answers in surd form.



- (b) In the triangle abc ,
- $|\angle acb| = 28^\circ 41'$, $|\angle bac| = 23^\circ 35'$
 and $|bc| = 15$ cm.
- Calculate $|ab|$.
 - x is on cb such that $ax \perp xb$ as shown.
 Calculate $|ax|$, correct to the nearest cm.



- (c) x, y, z are points on the circle of centre o .
 The radius of the circle is 10 cm.
 The triangle xoz is an equilateral triangle.
 Find
- area of triangle xoz
 - area of triangle xyz .

